

CODE

2

PAPER-1

P1-14-2

1220602

Time : 3 Hours

Maximum Marks : 180

Please read the instructions carefully. You are allotted 5 minutes specifically for this purpose.

## INSTRUCTIONS

## A. General

1. This booklet is your Question Paper. Do not break the seal of this booklet before being instructed to do so by the invigilators.
2. The question paper CODE is printed on the left hand top corner of this sheet and on the back cover page of this booklet.
3. Blank spaces and blank pages are provided in the question paper for your rough work. No additional sheets will be provided for rough work.
4. Blank papers, clipboards, log tables, slide rules, calculators, cameras, cellular phones, pagers and electronic gadget of any kind are NOT allowed inside the examination hall.
5. Write your Name and Roll number in the space provided on the back cover of this booklet.
6. Answers to the questions and personal details are to be filled on an Optical Response Sheet, which is provided separately. The ORS is a doublet of two sheets - upper and lower, having identical layout. The upper sheet is a machine-gradable Objective Response Sheet (ORS) which will be collected by the invigilator at the end of the examination. The upper sheet is designed in such a way that darkening the bubble with a ball point pen will leave an identical impression at the corresponding place on the lower sheet. You will be allowed to take away the lower sheet at the end of the examination. (see Figure-1 on the back cover page for the correct way of darkening the bubbles for valid answers).
7. **Use a black ball point pen only to darken the bubbles on the upper original sheet.** Apply sufficient pressure so that the impression is created on the lower sheet. See Figure-1 on the back cover page for appropriate way of darkening the bubbles for valid answers.
8. DO NOT TAMPER WITH / MUTILATE THE ORS OR THIS BOOKLET.
9. On breaking the seal of the booklet check that it contains **28** pages and all the **60** questions and corresponding answer choices are legible. Read carefully the instruction printed at the beginning of each section.

## B. Filling the right part of the ORS

10. The ORS also has a **CODE** printed on its left and right parts.
11. Verify that the CODE printed on the ORS (on both the left and right parts) is the same as that on this booklet and put your signature in the Box designated as R4.
12. **IF THE CODES DO NOT MATCH, ASK FOR A CHANGE OF THE BOOKLET / ORS AS APPLICABLE.**
13. Write your Name, Roll No. and the name of centre and sign with pen in the boxes provided on the upper sheet of ORS. **Do not write any of this anywhere else.** Darken the appropriate bubble **UNDER** each digit of your Roll No. in such way that the impression is created on the bottom sheet. (see example in Figure 2 on the back cover)

## C. Question Paper Format

The question paper consists of **three parts** (Physics, Chemistry and Mathematics). Each part consists of two sections.

14. **Section 1** contains **10 multiple choice questions**. Each question has four choices (A), (B), (C) and (D) out of which **ONE OR MORE THAN ONE are correct**.
15. **Section 2** contains **10 questions**. The answer to each of the questions is a single-digit integer, ranging from 0 to 9 (both inclusive).

DO NOT BREAK THE SEAL WITHOUT BEING INSTRUCTED TO DO SO BY THE INVIGILATOR



Please read the last page of this booklet for rest of the instructions.

	Subject	Section		Page No.
Part I	Physics	1	One or More Than One Option Correct Type	3 - 7
		2	One Integer Value Correct Type	8 - 12
Part II	Chemistry	1	One or More Than One Option Correct Type	13 - 17
		2	One Integer Value Correct Type	18 - 19
Part III	Mathematics	1	One or More Than One Option Correct Type	20 - 23
		2	One Integer Value Correct Type	24 - 26

---

**Space for Rough Work**



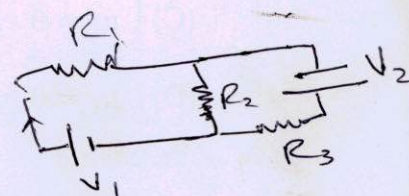
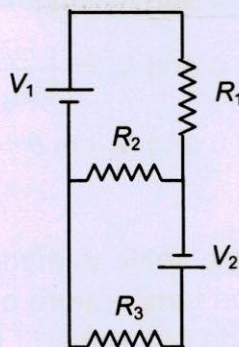
# PART I : PHYSICS

## SECTION – 1 : (One or More Than One Options Correct Type)

This section contains 10 multiple choice questions. Each question has four choices (A), (B), (C) and (D) out of which ONE or MORE THAN ONE are correct.

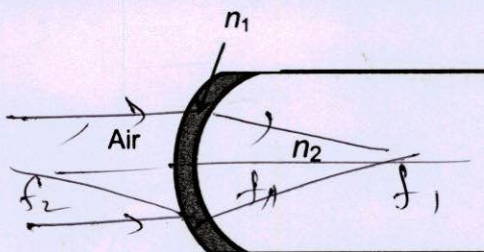
1. Two ideal batteries of *emf*  $V_1$  and  $V_2$  and three resistances  $R_1$ ,  $R_2$  and  $R_3$  are connected as shown in the figure. The current in resistance  $R_2$  would be zero if

- (A)  $V_1 = V_2$  and  $R_1 = R_2 = R_3$
- (B)  $V_1 = V_2$  and  $R_1 = 2R_2 = R_3$
- (C)  $V_1 = 2V_2$  and  $2R_1 = 2R_2 = R_3$
- (D)  $2V_1 = V_2$  and  $2R_1 = R_2 = R_3$



2. A transparent thin film of uniform thickness and refractive index  $n_1 = 1.4$  is coated on the convex spherical surface of radius  $R$  at one end of a long solid glass cylinder of refractive index  $n_2 = 1.5$ , as shown in the figure. Rays of light parallel to the axis of the cylinder traversing through the film from air to glass get focused at distance  $f_1$  from the film, while rays of light traversing from glass to air get focused at distance  $f_2$  from the film. Then

- (A)  $|f_1| = 3R$
- (B)  $|f_1| = 2.8R$
- (C)  $|f_2| = 2R$
- (D)  $|f_2| = 1.4R$

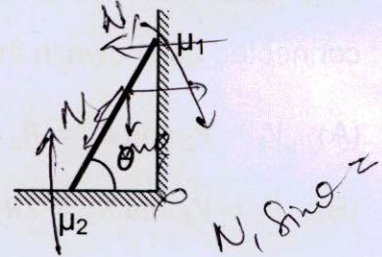


Space for Rough Work



3. In the figure, a ladder of mass  $m$  is shown leaning against a wall. It is in static equilibrium making an angle  $\theta$  with the horizontal floor. The coefficient of friction between the wall and the ladder is  $\mu_1$  and that between the floor and the ladder is  $\mu_2$ . The normal reaction of the wall on the ladder is  $N_1$  and that of the floor is  $N_2$ . If the ladder is about to slip, then

- (A)  $\mu_1 = 0$   $\mu_2 \neq 0$  and  $N_2 \tan \theta = \frac{mg}{2}$
- (B)  $\mu_1 \neq 0$   $\mu_2 = 0$  and  $N_1 \tan \theta = \frac{mg}{2}$
- (C)  $\mu_1 \neq 0$   $\mu_2 \neq 0$  and  $N_2 = \frac{mg}{1 + \mu_1 \mu_2}$
- (D)  $\mu_1 = 0$   $\mu_2 \neq 0$  and  $N_1 \tan \theta = \frac{mg}{2}$



4. Heater of an electric kettle is made of a wire of length  $L$  and diameter  $d$ . It takes 4 minutes to raise the temperature of 0.5 kg water by 40 K. This heater is replaced by a new heater having two wires of the same material, each of length  $L$  and diameter  $2d$ . The way these wires are connected is given in the options. How much time in minutes will it take to raise the temperature of the same amount of water by 40 K ?
- (A) 4 if wires are in parallel
  - (B) 2 if wires are in series
  - (C) 1 if wires are in series
  - (D) 0.5 if wires are in parallel

Space for Rough Work

Handwritten calculations for the resistance of wires:

$$R = \frac{\rho L}{\pi d^2 x}$$

$$R = \frac{4\rho}{\pi d^2}$$

$$R = \frac{\rho L}{A} = \frac{\rho L}{\pi d^2 x}$$

$$R = \frac{\rho}{\pi d^2}$$

$$R = \frac{2\rho}{\pi d^2}$$

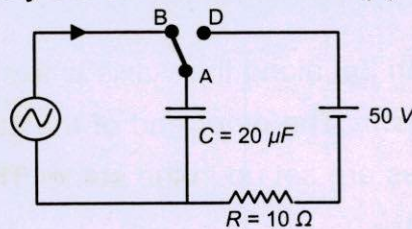
$$R = \frac{\rho}{2\pi d^2}$$

$$R = \frac{\rho}{\pi d^2} + \frac{\rho}{\pi d^2}$$

$$R = \frac{2\rho}{\pi d^2}$$



5. A light source, which emits two wavelengths  $\lambda_1 = 400 \text{ nm}$  and  $\lambda_2 = 600 \text{ nm}$ , is used in a Young's double slit experiment. If recorded fringe widths for  $\lambda_1$  and  $\lambda_2$  are  $\beta_1$  and  $\beta_2$  and the number of fringes for them within a distance  $y$  on one side of the central maximum are  $m_1$  and  $m_2$ , respectively, then
- (A)  $\beta_2 > \beta_1$
  - (B)  $m_1 > m_2$
  - (C) From the central maximum, 3<sup>rd</sup> maximum of  $\lambda_2$  overlaps with 5<sup>th</sup> minimum of  $\lambda_1$
  - (D) The angular separation of fringes for  $\lambda_1$  is greater than  $\lambda_2$
6. At time  $t = 0$ , terminal A in the circuit shown in the figure is connected to B by a key and an alternating current  $I(t) = I_0 \cos(\omega t)$ , with  $I_0 = 1 \text{ A}$  and  $\omega = 500 \text{ rad s}^{-1}$  starts flowing in it with the initial direction shown in the figure. At  $t = \frac{7\pi}{6\omega}$ , the key is switched from B to D. Now onwards only A and D are connected. A total charge  $Q$  flows from the battery to charge the capacitor fully. If  $C = 20 \mu\text{F}$ ,  $R = 10 \Omega$  and the battery is ideal with  $emf$  of  $50 \text{ V}$ , identify the correct statement (s).



$C = \frac{Q}{V}$   
 $50 \times 20 \times 10^{-6}$

- (A) Magnitude of the maximum charge on the capacitor before  $t = \frac{7\pi}{6\omega}$  is  $1 \times 10^{-3} \text{ C}$ .
- (B) The current in the left part of the circuit just before  $t = \frac{7\pi}{6\omega}$  is clockwise.
- (C) Immediately after A is connected to D, the current in  $R$  is  $10 \text{ A}$ .
- (D)  $Q = 2 \times 10^{-3} \text{ C}$ .

Space for Rough Work

$\frac{1}{20 \times 10^{-6} \times 500} + 10$

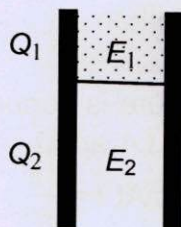
$10^{-10} + 10$

$\frac{1 + 10 \times 10^{-10}}{10^{-16}}$

$1 \times \frac{2\pi}{6\omega} = 1$



7. A parallel plate capacitor has a dielectric slab of dielectric constant  $K$  between its plates that covers  $1/3$  of the area of its plates, as shown in the figure. The total capacitance of the capacitor is  $C$  while that of the portion with dielectric in between is  $C_1$ . When the capacitor is charged, the plate area covered by the dielectric gets charge  $Q_1$  and the rest of the area gets charge  $Q_2$ . The electric field in the dielectric is  $E_1$  and that in the other portion is  $E_2$ . Choose the correct option/options, ignoring edge effects.



- (A)  $\frac{E_1}{E_2} = 1$       (B)  $\frac{E_1}{E_2} = \frac{1}{K}$       (C)  $\frac{Q_1}{Q_2} = \frac{3}{K}$       (D)  $\frac{C}{C_1} = \frac{2+K}{K}$
8. One end of a taut string of length  $3m$  along the  $x$  axis is fixed at  $x = 0$ . The speed of the waves in the string is  $100 \text{ ms}^{-1}$ . The other end of the string is vibrating in the  $y$  direction so that stationary waves are set up in the string. The possible waveform(s) of these stationary waves is(are)
- (A)  $y(t) = A \sin \frac{\pi x}{6} \cos \frac{50\pi t}{3}$       (B)  $y(t) = A \sin \frac{\pi x}{3} \cos \frac{100\pi t}{3}$   
 (C)  $y(t) = A \sin \frac{5\pi x}{6} \cos \frac{250\pi t}{3}$       (D)  $y(t) = A \sin \frac{5\pi x}{2} \cos 250\pi t$

---

Space for Rough Work



9. A student is performing an experiment using a resonance column and a tuning fork of frequency  $244 \text{ s}^{-1}$ . He is told that the air in the tube has been replaced by another gas (assume that the column remains filled with the gas). If the minimum height at which resonance occurs is  $(0.350 \pm 0.005) \text{ m}$ , the gas in the tube is

(Useful information :  $\sqrt{167RT} = 640 \text{ J}^{1/2} \text{ mole}^{-1/2}$ ;  $\sqrt{140RT} = 590 \text{ J}^{1/2} \text{ mole}^{-1/2}$ . The molar masses  $M$  in grams are given in the options. Take the values of  $\sqrt{\frac{10}{M}}$  for each gas as given there.)

- (A) Neon ( $M = 20, \sqrt{\frac{10}{20}} = \frac{7}{10}$ )  
 (B) Nitrogen ( $M = 28, \sqrt{\frac{10}{28}} = \frac{3}{5}$ )  
 (C) Oxygen ( $M = 32, \sqrt{\frac{10}{32}} = \frac{9}{16}$ )  
 (D) Argon ( $M = 36, \sqrt{\frac{10}{36}} = \frac{17}{32}$ )

10. Let  $E_1(r), E_2(r)$  and  $E_3(r)$  be the respective electric fields at a distance  $r$  from a point charge  $Q$ , an infinitely long wire with constant linear charge density  $\lambda$ , and an infinite plane with uniform surface charge density  $\sigma$ . If  $E_1(r_0) = E_2(r_0) = E_3(r_0)$  at a given distance  $r_0$ , then

- (A)  $Q = 4\sigma\pi r_0^2$   
 (B)  $r_0 = \frac{\lambda}{2\pi\sigma}$   
 (C)  $E_1(r_0/2) = 2E_2(r_0/2)$   
 (D)  $E_2(r_0/2) = 4E_3(r_0/2)$

Space for Rough Work

Handwritten notes and diagrams for problem 10:

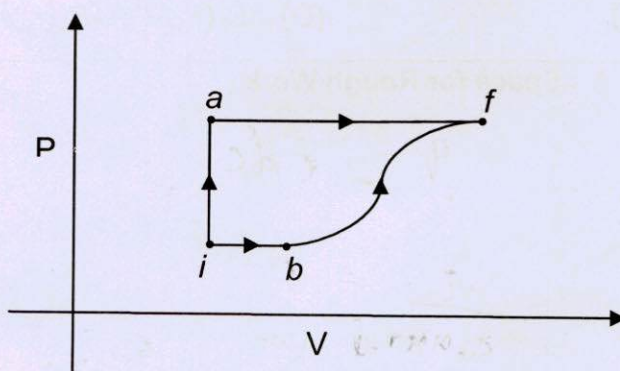
- Diagram 1: Point charge  $Q$  with electric field  $E_1$  at distance  $r$ .
- Diagram 2: Infinite wire with linear charge density  $\lambda$  and electric field  $E_2$  at distance  $r$ .
- Diagram 3: Infinite plane with surface charge density  $\sigma$  and electric field  $E_3$  at distance  $r$ .
- Equations:
  - $\frac{Q}{\epsilon_0} = \epsilon_0 E_1$
  - $\frac{Q}{\epsilon_0} = E_1$
  - $\frac{\lambda}{\epsilon_0 2\pi r} = E_2$
  - $\frac{\lambda}{2\pi\epsilon_0 r} = E_2$
  - $\frac{\lambda}{2\pi\epsilon_0 r} = E_3$
  - $\frac{\sigma}{\epsilon_0} = E_3$
  - $\frac{Q}{\epsilon_0 r^2} = E_1$
  - $\frac{\lambda}{2\pi\epsilon_0 r} = E_2$
  - $\frac{\sigma}{\epsilon_0} = E_3$



## SECTION – 2 : (One Integer Value Correct Type)

This section contains 10 questions. Each question, when worked out will result in one integer from 0 to 9 (both inclusive).

11. Two parallel wires in the plane of the paper are distance  $X_0$  apart. A point charge is moving with speed  $u$  between the wires in the same plane at a distance  $X_1$  from one of the wires. When the wires carry current of magnitude  $I$  in the same direction, the radius of curvature of the path of the point charge is  $R_1$ . In contrast, if the currents  $I$  in the two wires have directions opposite to each other, the radius of curvature of the path is  $R_2$ . If  $\frac{X_0}{X_1} = 3$ , the value of  $\frac{R_1}{R_2}$  is
12. A thermodynamic system is taken from an initial state  $i$  with internal energy  $U_i = 100 \text{ J}$  to the final state  $f$  along two different paths  $iaf$  and  $ibf$ , as schematically shown in the figure. The work done by the system along the paths  $af$ ,  $ib$  and  $bf$  are  $W_{af} = 200 \text{ J}$ ,  $W_{ib} = 50 \text{ J}$  and  $W_{bf} = 100 \text{ J}$  respectively. The heat supplied to the system along the path  $iaf$ ,  $ib$  and  $bf$  are  $Q_{iaf}$ ,  $Q_{ib}$  and  $Q_{bf}$  respectively. If the internal energy of the system in the state  $b$  is  $U_b = 200 \text{ J}$  and  $Q_{iaf} = 500 \text{ J}$ , the ratio  $Q_{bf}/Q_{ib}$  is

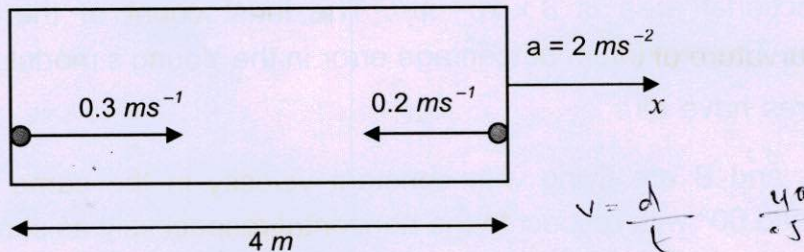


Space for Rough Work

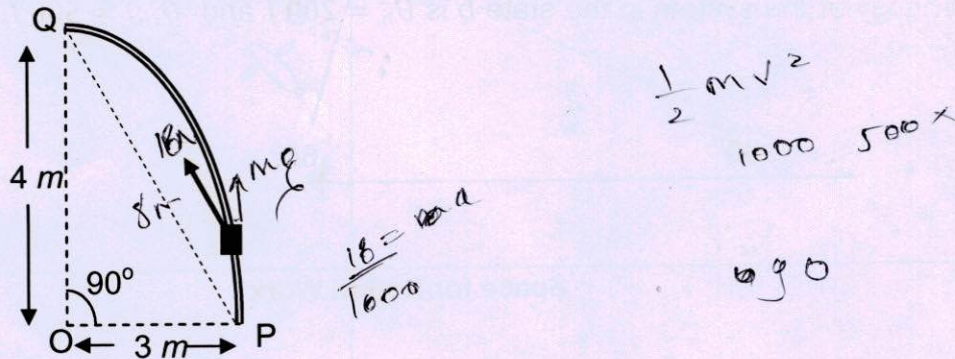




13. A rocket is moving in a gravity free space with a constant acceleration of  $2 \text{ ms}^{-2}$  along  $+x$  direction (see figure). The length of a chamber inside the rocket is  $4 \text{ m}$ . A ball is thrown from the left end of the chamber in  $+x$  direction with a speed of  $0.3 \text{ ms}^{-1}$  relative to the rocket. At the same time, another ball is thrown in  $-x$  direction with a speed of  $0.2 \text{ ms}^{-1}$  from its right end relative to the rocket. The time in seconds when the two balls hit each other is



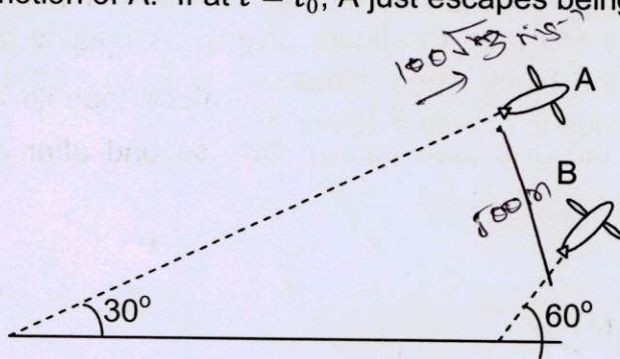
14. Consider an elliptically shaped rail PQ in the vertical plane with  $OP = 3 \text{ m}$  and  $OQ = 4 \text{ m}$ . A block of mass  $1 \text{ kg}$  is pulled along the rail from P to Q with a force of  $18 \text{ N}$ , which is always parallel to line PQ (see the figure given). Assuming no frictional losses, the kinetic energy of the block when it reaches Q is  $(n \times 10)$  Joules. The value of  $n$  is (take acceleration due to gravity =  $10 \text{ ms}^{-2}$ )



Space for Rough Work



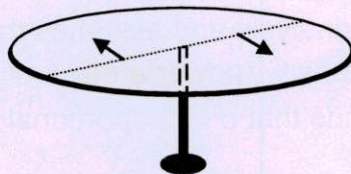
15. During Searle's experiment, zero of the Vernier scale lies between  $3.20 \times 10^{-2} \text{ m}$  and  $3.25 \times 10^{-2} \text{ m}$  of the main scale. The 20<sup>th</sup> division of the Vernier scale exactly coincides with one of the main scale divisions. When an additional load of 2 kg is applied to the wire, the zero of the Vernier scale still lies between  $3.20 \times 10^{-2} \text{ m}$  and  $3.25 \times 10^{-2} \text{ m}$  of the main scale but now the 45<sup>th</sup> division of Vernier scale coincides with one of the main scale divisions. The length of the thin metallic wire is 2 m and its cross-sectional area is  $8 \times 10^{-7} \text{ m}^2$ . The least count of the Vernier scale is  $1.0 \times 10^{-5} \text{ m}$ . The maximum percentage error in the Young's modulus of the wire is
16. Airplanes A and B are flying with constant velocity in the same vertical plane at angles  $30^\circ$  and  $60^\circ$  with respect to the horizontal respectively as shown in figure. The speed of A is  $100\sqrt{3} \text{ ms}^{-1}$ . At time  $t = 0 \text{ s}$ , an observer in A finds B at a distance of 500 m. This observer sees B moving with a constant velocity perpendicular to the line of motion of A. If at  $t = t_0$ , A just escapes being hit by B,  $t_0$  in seconds is



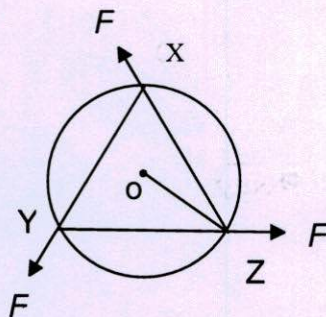
Space for Rough Work



17. A horizontal circular platform of radius  $0.5\text{ m}$  and mass  $0.45\text{ kg}$  is free to rotate about its axis. Two massless spring toy-guns, each carrying a steel ball of mass  $0.05\text{ kg}$  are attached to the platform at a distance  $0.25\text{ m}$  from the centre on its either sides along its diameter (see figure). Each gun simultaneously fires the balls horizontally and perpendicular to the diameter in opposite directions. After leaving the platform, the balls have horizontal speed of  $9\text{ ms}^{-1}$  with respect to the ground. The rotational speed of the platform in  $\text{rad s}^{-1}$  after the balls leave the platform is



18. A uniform circular disc of mass  $1.5\text{ kg}$  and radius  $0.5\text{ m}$  is initially at rest on a horizontal frictionless surface. Three forces of equal magnitude  $F = 0.5\text{ N}$  are applied simultaneously along the three sides of an equilateral triangle  $XYZ$  with its vertices on the perimeter of the disc (see figure). One second after applying the forces, the angular speed of the disc in  $\text{rad s}^{-1}$  is




---

Space for Rough Work



19. A galvanometer gives full scale deflection with  $0.006\text{ A}$  current. By connecting it to a  $4990\ \Omega$  resistance, it can be converted into a voltmeter of range  $0 - 30\text{ V}$ . If connected to a  $\frac{2n}{249}\ \Omega$  resistance, it becomes an ammeter of range  $0 - 1.5\text{ A}$ . The value of  $n$  is
20. To find the distance  $d$  over which a signal can be seen clearly in foggy conditions, a railways engineer uses dimensional analysis and assumes that the distance depends on the mass density  $\rho$  of the fog, intensity (power/area)  $S$  of the light from the signal and its frequency  $f$ . The engineer finds that  $d$  is proportional to  $S^{1/n}$ . The value of  $n$  is

---

Space for Rough Work

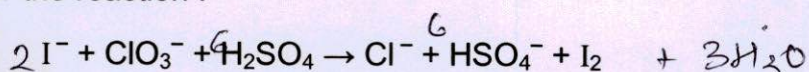


## PART II : CHEMISTRY

### SECTION – 1 : (One or More Than One Options Correct Type)

This section contains 10 multiple choice type questions. Each question has four choices (A), (B), (C) and (D) out of which ONE or MORE THAN ONE are correct.

21. In a galvanic cell, the salt bridge
- (A) does not participate chemically in the cell reaction.
  - (B) stops the diffusion of ions from one electrode to another.
  - (C) is necessary for the occurrence of the cell reaction.
  - (D) ensures mixing of the two electrolytic solutions.
22. The pair(s) of reagents that yield paramagnetic species is/are
- (A) Na and excess of  $\text{NH}_3$
  - (B) K and excess of  $\text{O}_2$
  - (C) Cu and dilute  $\text{HNO}_3$
  - (D)  $\text{O}_2$  and 2-ethylanthraquinol
23. For the reaction :



The correct statement(s) in the balanced equation is/are :

- (A) Stoichiometric coefficient of  $\text{HSO}_4^-$  is 6.
- (B) Iodide is oxidized.
- (C) Sulphur is reduced.
- (D)  $\text{H}_2\text{O}$  is one of the products.

Space for Rough Work



24. Upon heating with  $\text{Cu}_2\text{S}$ , the reagent(s) that give copper metal is/are
- (A)  $\text{CuFeS}_2$  (B)  $\text{CuO}$   
(C)  $\text{Cu}_2\text{O}$  (D)  $\text{CuSO}_4$
25. The correct statement(s) for orthoboric acid is/are
- (A) It behaves as a weak acid in water due to self ionization.  
(B) Acidity of its aqueous solution increases upon addition of ethylene glycol.  
(C) It has a three dimensional structure due to hydrogen bonding.  
(D) It is a weak electrolyte in water.

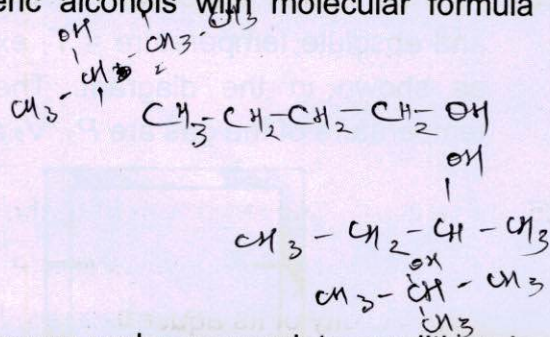
---

Space for Rough Work

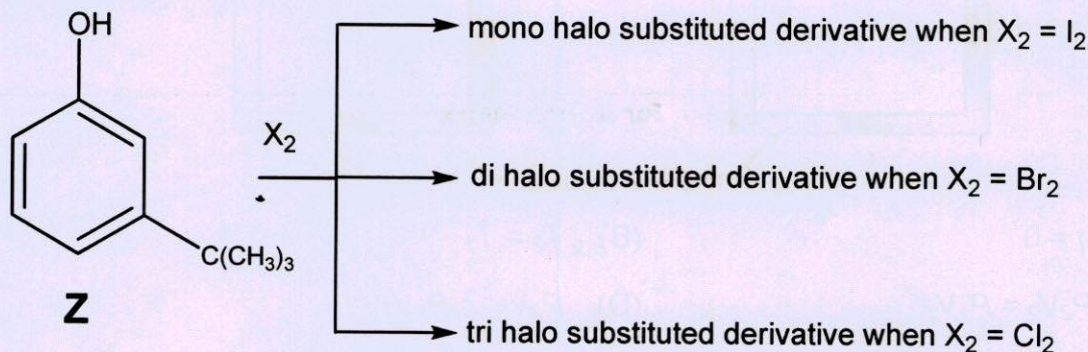


26. The correct combination of names for isomeric alcohols with molecular formula  $C_4H_{10}O$  is/are

- (A) *tert*-butanol and 2-methylpropan-2-ol ✗
- (B) *tert*-butanol and 1, 1-dimethylethan-1-ol
- (C) *n*-butanol and butan-1-ol
- (D) isobutyl alcohol and 2-methylpropan-1-ol



27. The reactivity of compound **Z** with different halogens under appropriate conditions is given below :



The observed pattern of electrophilic substitution can be explained by

- (A) the steric effect of the halogen
- (B) the steric effect of the *tert*-butyl group
- (C) the electronic effect of the phenolic group
- (D) the electronic effect of the *tert*-butyl group

Space for Rough Work

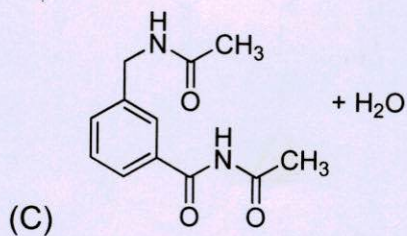
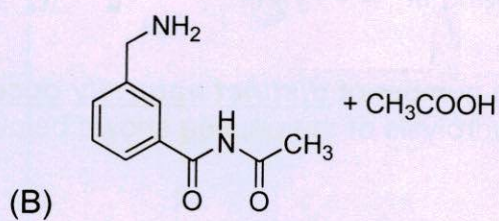
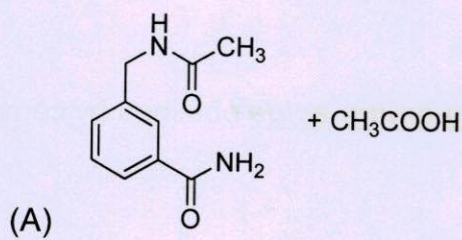
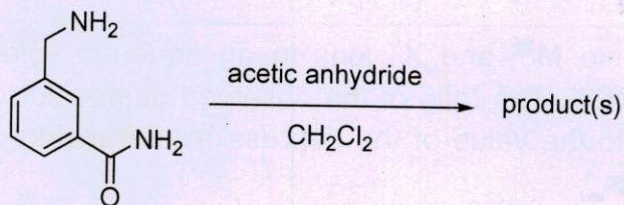
CHEMISTRY







30. In the reaction shown below, the major product(s) formed is/are



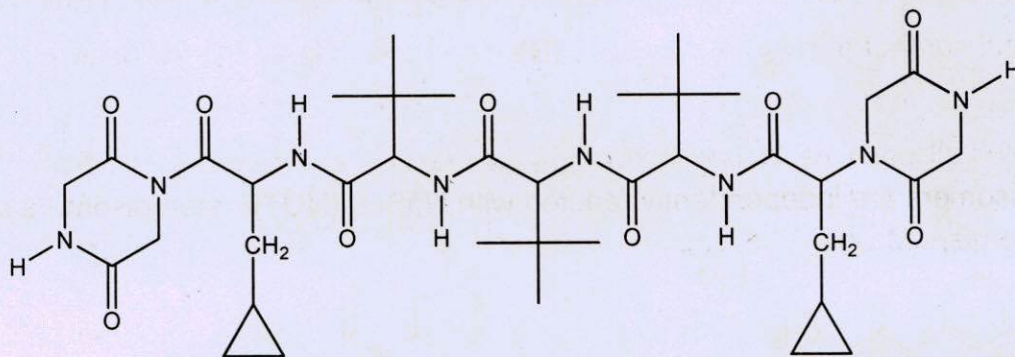
Space for Rough Work



## SECTION – 2 : (One Integer Value Correct Type)

This section contains 10 questions. Each question, when worked out will result in one integer from 0 to 9 (both inclusive).

31.  $\text{MX}_2$  dissociates into  $\text{M}^{2+}$  and  $\text{X}^-$  ions in an aqueous solution, with a degree of dissociation ( $\alpha$ ) of 0.5. The ratio of the observed depression of freezing point of the aqueous solution to the value of the depression of freezing point in the absence of ionic dissociation is
32. In an atom, the total number of electrons having quantum numbers  $n = 4$ ,  $|m_l| = 1$  and  $m_s = -1/2$  is  $2e$
33. The total number of **distinct naturally occurring amino acids** obtained by complete acidic hydrolysis of the peptide shown below is



34. If the value of Avogadro number is  $6.023 \times 10^{23} \text{ mol}^{-1}$  and the value of Boltzmann constant is  $1.380 \times 10^{-23} \text{ J K}^{-1}$ , then the number of significant digits in the calculated value of the universal gas constant is
35. A compound  $\text{H}_2\text{X}$  with molar weight of 80 g is dissolved in a solvent having density of  $0.4 \text{ g ml}^{-1}$ . Assuming no change in volume upon dissolution, the **molality** of a 3.2 molar solution is

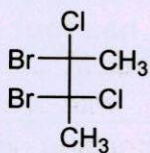
Space for Rough Work

$$\frac{160}{3.2}$$

$$\begin{array}{r} 6.023 \\ \times 1.380 \\ \hline 1806900 \\ 1806900 \\ 6023000 \\ \hline 8.311740 \end{array}$$




36. The total number(s) of **stable** conformers with **non-zero** dipole moment for the following compound is (are)



37. A list of species having the formula  $\text{XZ}_4$  is given below.

$\text{XeF}_4$ ,  $\text{SF}_4$ ,  $\text{SiF}_4$ ,  $\text{BF}_4^-$ ,  $\text{BrF}_4^-$ ,  $[\text{Cu}(\text{NH}_3)_4]^{2+}$ ,  $[\text{FeCl}_4]^{2-}$ ,  $[\text{CoCl}_4]^{2-}$  and  $[\text{PtCl}_4]^{2-}$ .

Defining shape on the basis of the location of X and Z atoms, the total number of species having a square planar shape is



38. Consider the following list of reagents :

Acidified  $\text{K}_2\text{Cr}_2\text{O}_7$ , alkaline  $\text{KMnO}_4$ ,  $\text{CuSO}_4$ ,  $\text{H}_2\text{O}_2$ ,  $\text{Cl}_2$ ,  $\text{O}_3$ ,  $\text{FeCl}_3$ ,  $\text{HNO}_3$  and  $\text{Na}_2\text{S}_2\text{O}_3$ .

The total number of reagents that can oxidise aqueous iodide to iodine is

39. Consider all possible isomeric ketones, including stereoisomers of MW = 100. All these isomers are independently reacted with  $\text{NaBH}_4$  (**NOTE**: stereoisomers are also reacted separately). The total number of ketones that give a racemic product(s) is/are

40. Among  $\text{PbS}$ ,  $\text{CuS}$ ,  $\text{HgS}$ ,  $\text{MnS}$ ,  $\text{Ag}_2\text{S}$ ,  $\text{NiS}$ ,  $\text{CoS}$ ,  $\text{Bi}_2\text{S}_3$  and  $\text{SnS}_2$ , the total number of **BLACK** coloured sulphides is

Space for Rough Work



# PART III : MATHEMATICS

## SECTION – 1 : (One or More Than One Options Correct Type)

This section contains 10 multiple choice questions. Each question has four choices (A), (B), (C) and (D) out of which ONE or MORE THAN ONE are correct.

41. Let  $M$  be a  $2 \times 2$  symmetric matrix with integer entries. Then  $M$  is invertible if
- (A) the first column of  $M$  is the transpose of the second row of  $M$
  - (B) the second row of  $M$  is the transpose of the first column of  $M$
  - (C)  $M$  is a diagonal matrix with nonzero entries in the main diagonal
  - (D) the product of entries in the main diagonal of  $M$  is not the square of an integer
42. A circle  $S$  passes through the point  $(0,1)$  and is orthogonal to the circles  $(x-1)^2 + y^2 = 16$  and  $x^2 + y^2 = 1$ . Then
- (A) radius of  $S$  is 8
  - (B) radius of  $S$  is 7
  - (C) centre of  $S$  is  $(-7,1)$
  - (D) centre of  $S$  is  $(-8,1)$

Space for Rough Work

$x^2 + (y-1)^2 = r^2$   
 $7^2 = (-7-0)^2 + (1-1)^2$   
 $8^2 = (-8-0)^2 + (1-1)^2$   
 $(0,0) \quad (r=1)$   
 $(1,0) \quad (r=4)$   
 $(a,b) \quad (r=?)$   
 $a^2 + b^2 = (a-1)^2 + b^2$   
 $a^2 + b^2 = a^2 - 2a + 1 + b^2$   
 $a = \frac{1}{2}$

\* 2

$\sqrt{50}$      $\sqrt{65}$



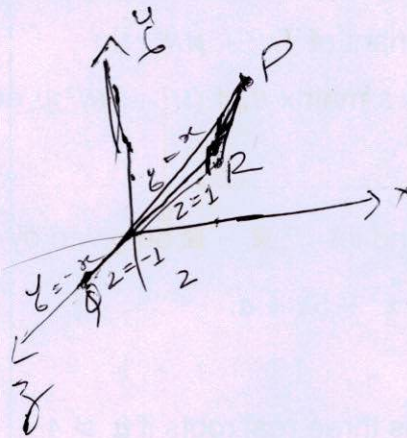
43. Let  $\vec{x}$ ,  $\vec{y}$  and  $\vec{z}$  be three vectors each of magnitude  $\sqrt{2}$  and the angle between each pair of them is  $\frac{\pi}{3}$ . If  $\vec{a}$  is a nonzero vector perpendicular to  $\vec{x}$  and  $\vec{y} \times \vec{z}$  and  $\vec{b}$  is a nonzero vector perpendicular to  $\vec{y}$  and  $\vec{z} \times \vec{x}$ , then

- (A)  $\vec{b} = (\vec{b} \cdot \vec{z})(\vec{z} - \vec{x})$  (B)  $\vec{a} = (\vec{a} \cdot \vec{y})(\vec{y} - \vec{z})$   
 (C)  $\vec{a} \cdot \vec{b} = -(\vec{a} \cdot \vec{y})(\vec{b} \cdot \vec{z})$  (D)  $\vec{a} = (\vec{a} \cdot \vec{y})(\vec{z} - \vec{y})$

44. From a point  $P(\lambda, \lambda, \lambda)$ , perpendiculars  $PQ$  and  $PR$  are drawn respectively on the lines  $y = x, z = 1$  and  $y = -x, z = -1$ . If  $P$  is such that  $\angle QPR$  is a right angle, then the possible value(s) of  $\lambda$  is(are)

- (A)  $\sqrt{2}$  (B) 1 (C) -1 (D)  $-\sqrt{2}$

Space for Rough Work



45. For every pair of continuous functions  $f, g: [0, 1] \rightarrow \mathbb{R}$  such that

$$\max \{f(x): x \in [0, 1]\} = \max \{g(x): x \in [0, 1]\},$$

the correct statement(s) is(are) :

- (A)  $(f(c))^2 + 3f(c) = (g(c))^2 + 3g(c)$  for some  $c \in [0, 1]$
- (B)  $(f(c))^2 + f(c) = (g(c))^2 + 3g(c)$  for some  $c \in [0, 1]$
- (C)  $(f(c))^2 + 3f(c) = (g(c))^2 + g(c)$  for some  $c \in [0, 1]$
- (D)  $(f(c))^2 = (g(c))^2$  for some  $c \in [0, 1]$

46. Let  $M$  and  $N$  be two  $3 \times 3$  matrices such that  $MN = NM$ . Further, if  $M \neq N^2$  and  $M^2 = N^4$ , then

- (A) determinant of  $(M^2 + MN^2)$  is 0
- (B) there is a  $3 \times 3$  non-zero matrix  $U$  such that  $(M^2 + MN^2)U$  is the zero matrix
- (C) determinant of  $(M^2 + MN^2) \geq 1$
- (D) for a  $3 \times 3$  matrix  $U$ , if  $(M^2 + MN^2)U$  equals the zero matrix then  $U$  is the zero matrix

47. Let  $a \in \mathbb{R}$  and let  $f: \mathbb{R} \rightarrow \mathbb{R}$  be given by

$$f(x) = x^5 - 5x + a.$$

Then

- (A)  $f(x)$  has three real roots if  $a > 4$
- (B)  $f(x)$  has only one real root if  $a > 4$
- (C)  $f(x)$  has three real roots if  $a < -4$
- (D)  $f(x)$  has three real roots if  $-4 < a < 4$

---

Space for Rough Work



48. Let  $f: (0, \infty) \rightarrow \mathbb{R}$  be given by

$$f(x) = \int_{\frac{1}{x}}^x e^{-(t+\frac{1}{t})} \frac{dt}{t}.$$

Then

- (A)  $f(x)$  is monotonically increasing on  $[1, \infty)$
- (B)  $f(x)$  is monotonically decreasing on  $(0, 1)$
- (C)  $f(x) + f\left(\frac{1}{x}\right) = 0$ , for all  $x \in (0, \infty)$
- (D)  $f(2^x)$  is an odd function of  $x$  on  $\mathbb{R}$

49. Let  $f: \left(-\frac{\pi}{2}, \frac{\pi}{2}\right) \rightarrow \mathbb{R}$  be given by

$$f(x) = (\log(\sec x + \tan x))^3.$$

Then

- (A)  $f(x)$  is an odd function
- (B)  $f(x)$  is a one-one function
- (C)  $f(x)$  is an onto function
- (D)  $f(x)$  is an even function

*3 log(sec x + tan x) + tan x*  
*3 ln(1/cos x + tan x) + tan x*

50. Let  $f: [a, b] \rightarrow [1, \infty)$  be a continuous function and let  $g: \mathbb{R} \rightarrow \mathbb{R}$  be defined as

$$g(x) = \begin{cases} 0 & \text{if } x < a, \\ \int_a^x f(t) dt & \text{if } a \leq x \leq b, \\ \int_a^b f(t) dt & \text{if } x > b. \end{cases}$$

Then

- (A)  $g(x)$  is continuous but not differentiable at  $a$
- (B)  $g(x)$  is differentiable on  $\mathbb{R}$
- (C)  $g(x)$  is continuous but not differentiable at  $b$
- (D)  $g(x)$  is continuous and differentiable at either  $a$  or  $b$  but not both

MATHEMATICS

Space for Rough Work



**SECTION – 2 : (One Integer Value Correct Type)**

This section contains 10 questions. Each question, when worked out will result in one integer from 0 to 9 (both inclusive).

51. Let  $\vec{a}$ ,  $\vec{b}$ , and  $\vec{c}$  be three non-coplanar unit vectors such that the angle between every pair of them is  $\frac{\pi}{3}$ . If  $\vec{a} \times \vec{b} + \vec{b} \times \vec{c} = p\vec{a} + q\vec{b} + r\vec{c}$ , where  $p, q$  and  $r$  are scalars, then the value of  $\frac{p^2 + 2q^2 + r^2}{q^2}$  is

52. Let  $f: [0, 4\pi] \rightarrow [0, \pi]$  be defined by  $f(x) = \cos^{-1}(\cos x)$ . The number of points  $x \in [0, 4\pi]$  satisfying the equation

$$f(x) = \frac{10-x}{10}$$

*Handwritten notes:*  
 $10 - x = 10$   
 $-x = 0$   
 $x = 0$

is

53. For a point  $P$  in the plane, let  $d_1(P)$  and  $d_2(P)$  be the distances of the point  $P$  from the lines  $x - y = 0$  and  $x + y = 0$  respectively. The area of the region  $R$  consisting of all points  $P$  lying in the first quadrant of the plane and satisfying  $2 \leq d_1(P) + d_2(P) \leq 4$ , is

54. The largest value of the non-negative integer  $a$  for which

$$\lim_{x \rightarrow 1} \left\{ \frac{-ax + \sin(x-1) + a}{x + \sin(x-1) - 1} \right\}^{\frac{1-x}{1-\sqrt{x}}} = \frac{1}{4}$$

is

Space for Rough Work





55. Let  $n \geq 2$  be an integer. Take  $n$  distinct points on a circle and join each pair of points by a line segment. Colour the line segment joining every pair of adjacent points by blue and the rest by red. If the number of red and blue line segments are equal, then the value of  $n$  is

56. Let  $a, b, c$  be positive integers such that  $\frac{b}{a}$  is an integer. If  $a, b, c$  are in geometric progression and the arithmetic mean of  $a, b, c$  is  $b + 2$ , then the value of

is  $\frac{a^2 + a - 14}{a + 1}$

$a = b$   
 $\frac{a+c}{2} = b$   
 $a+c = 2b$

$\sqrt{ac} = b + 2$

$a+c = b^2 + 4 + 2b$   
 $2b = b^2 + 4$   
 $b = 2$

57. Let  $n_1 < n_2 < n_3 < n_4 < n_5$  be positive integers such that  $n_1 + n_2 + n_3 + n_4 + n_5 = 20$ . Then the number of such distinct arrangements  $(n_1, n_2, n_3, n_4, n_5)$  is

Space for Rough Work

$\sqrt{ac} = b$

$2, 3, 4, 5, 6$   
 $\frac{a+c}{2} = b + 2$   
 $a+c = 2b$



$\frac{2+6}{5}$

$\frac{16}{6}$

4



58. Let  $f: \mathbb{R} \rightarrow \mathbb{R}$  and  $g: \mathbb{R} \rightarrow \mathbb{R}$  be respectively given by  $f(x) = |x| + 1$  and  $g(x) = x^2 + 1$ . Define  $h: \mathbb{R} \rightarrow \mathbb{R}$  by

$$h(x) = \begin{cases} \max \{f(x), g(x)\} & \text{if } x \leq 0, \\ \min \{f(x), g(x)\} & \text{if } x > 0. \end{cases}$$

The number of points at which  $h(x)$  is not differentiable is

59. The slope of the tangent to the curve  $(y - x^5)^2 = x(1 + x^2)^2$  at the point  $(1, 3)$  is

60. The value of

is  $\int_0^1 4x^3 \left\{ \frac{d^2}{dx^2} (1 - x^2)^5 \right\} dx$

Space for Rough Work

$$\int_0^1 4x^3 \left( 5(0 - 2x) \right) dx$$

$$40x^4(1 - x^2)$$

$$40 \left( \frac{x^5}{5} - \frac{x^7}{7} \right) \Big|_0^1$$

$$40 \left( \frac{1}{5} - \frac{1}{7} \right) = 40 \left( \frac{2}{35} \right) = \frac{80}{35}$$

$$\frac{d}{dx} \left( 5(1 - x^2)^2 \right) = 10(1 - 3x^2)$$

$$40 \left( \frac{x^4}{4} - \frac{3x^6}{6} \right) \Big|_0^1$$

$$= 40 \left( \frac{1}{4} - \frac{3}{6} \cdot \frac{1}{2} \right)$$

$$= 40 \left( \frac{2 - 3}{8} \right) = 40 \times \frac{-1}{8} = -5$$



$$\frac{d}{dx} \left( 5(1 - x^2)^2 \right) = 10(x - x^3)$$

$$40 \left( \frac{x^4}{4} - \frac{3x^6}{6} \right) \Big|_0^1$$

$$= 40 \left( \frac{1}{4} - \frac{1}{2} \right) = -10$$

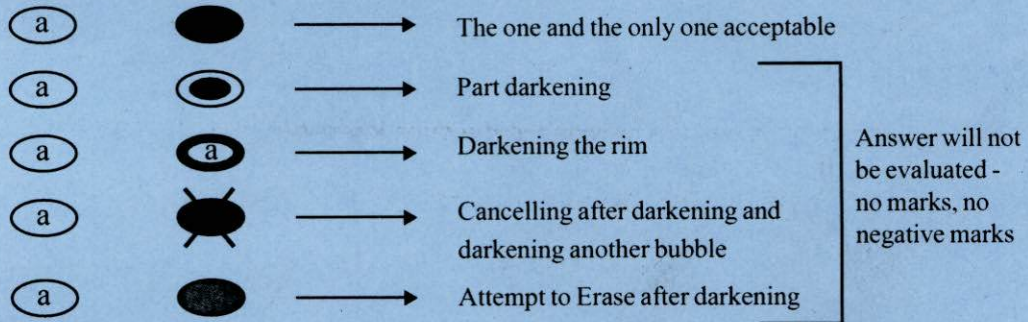
Space for Rough Work



**D. Marking Scheme**

16. For each question in **Section 1**, you will be awarded **3 marks** if you darken all the bubble(s) corresponding to the correct answer(s) and **zero mark** if no bubbles are darkened. **No negative** marks will be awarded for incorrect answers in this section.
17. For each question in **Section 2**, you will be awarded **3 marks** if you darken only the bubble corresponding to the correct answer and **zero mark** if no bubble is darkened. **No negative** marks will be awarded for incorrect answer in this section.



**Appropriate way of darkening the bubble for your answer to be evaluated :**



**Figure-1 : Correct way of bubbling for valid answer and a few examples of invalid answers. Any other form of partial marking such as ticking or crossing the bubble will be considered invalid.**

5	0	4	5	2	3	1
0	0	0	0	0	0	0
1	1	1	1	1	1	1
2	2	2	2	2	2	2
3	3	3	3	3	3	3
4	4	4	4	4	4	4
5	5	5	5	5	5	5
6	6	6	6	6	6	6
7	7	7	7	7	7	7
8	8	8	8	8	8	8
9	9	9	9	9	9	9

**Figure-2 : Correct Way of Bubbling your Roll Number on the ORS. (Example Roll Number : 5045231)**

<b>Name of the Candidate</b>	<b>Roll Number</b>
ROHIT DAWAR	2 0 4 1 0 0 2
I have read all instructions and shall abide by them.	I have verified all the information filled by the candidate.
 Signature of the Candidate	 Signature of the Invigilator