



**Resonance**<sup>®</sup>  
Educating for better tomorrow

**NEET 2017**  
**07-05-2017**

**SUBJECT - PHYSICS**

Time : 3 :00 Hrs. समय : 3 घंटे

Max. Marks (अधिकतम अंक): 720

READ THE INSTRUCTIONS CAREFULLY (कृपया इन निर्देशों को ध्यान से पढ़ें)

Important Instructions:	महत्वपूर्ण निर्देश :
1. The Answer Sheet is inside this Test Booklet. When you are directed to open the Test Booklet, take out the Answer Sheet and fill in the particulars on <b>Side-1</b> and <b>Side-2</b> carefully with <b>blue/black</b> ball point pen only.	1. उत्तर पत्र इस परीक्षा पुस्तिका के अन्दर रखा है। जब आपको परीक्षा पुस्तिका खोलने को कहा जाए, तो उत्तर पत्र निकाल कर <b>पृष्ठ-1</b> एवं <b>पृष्ठ-2</b> पर केवल <b>नीले/काले</b> बॉल पॉइंट पेन से विवरण भरें।
2. The test is of <b>3 hours</b> duration and Test Booklet contains <b>180 questions</b> . Each question carries 4 marks. For each correct response, the candidate will get <b>4 marks</b> . For each incorrect response, <b>one mark</b> will be deducted from the total scores. The maximum marks are <b>720</b> .	2. परीक्षा की अवधि <b>3 घंटे</b> है एवं परीक्षा पुस्तिका में <b>180</b> प्रश्न हैं। प्रत्येक प्रश्न <b>4 अंक</b> का है। प्रत्येक सही उत्तर के लिए परीक्षार्थी को <b>4 अंक</b> दिए जाएंगे। प्रत्येक गलत उत्तर के लिए कुल योग में से <b>एक अंक</b> घटाया जाएगा। अधिकतम अंक <b>720</b> हैं।
3. Use <b>Blue/Black Ball Point Pen</b> only for writing particulars on this page/markings response.	3. इस पृष्ठ पर विवरण अंकित करने एवं उत्तर पत्र पर निशान लगाने के लिए <b>केवल नीले/काले बॉल पॉइंट पेन</b> का प्रयोग करें।
4. Rough work is to be done on the space provided for this purpose in the Test Booklet only.	4. रफ कार्य इस परीक्षा पुस्तिका में निर्धारित स्थान पर ही करें।
5. <b>On completion of the test, the candidate must handover the Answer Sheet to the invigilator in the Room/Hall. The candidates are allowed to take away this Test Booklet with them.</b>	5. <b>परीक्षा सम्पन्न होने पर, परीक्षार्थी कक्ष/हॉल छोड़ने से पूर्व उत्तर पत्र कक्ष निरीक्षक को अवश्य सौंप दें। परीक्षार्थी अपने साथ प्रश्न पुस्तिका को ले जा सकते हैं।</b>
6. The CODE for this <b>Booklet</b> is _____. Make sure that the CODE printed on <b>Side-2</b> of the Answer Sheet is the same as that on this Booklet. In case of discrepancy, the candidate should immediately report the matter to the Invigilator for replacement of both the Test Booklets and the Answer Sheets.	6. इस पुस्तिका का संकेत है _____. यह सुनिश्चित कर लें कि इस पुस्तिका का संकेत, उत्तर पत्र के <b>पृष्ठ-2</b> पद छपे संकेत से मिलता है। अगर यह भिन्न हो, तो परीक्षार्थी दूसरी परीक्षा पुस्तिका और उत्तर पत्र लेने के लिए निरीक्षक को तुरन्त अवगत कराएं।
7. The Candidates should ensure that the Answer Sheet is not folded. Do not make any stray marks on the Answer Sheet. Do not write your roll no. anywhere else except in the specified space in the Test Booklet/Answer Sheet.	7. परीक्षार्थी सुनिश्चित करें कि इस उत्तर पत्र को मोड़ा न जाए एवं उस पर कोई अन्य निशान न लगाएं। परीक्षार्थी अपना अनुक्रमांक प्रश्न पुस्तिका/उत्तर पत्र में निर्धारित स्थान के अतिरिक्त अन्यत्र न लिखें।
8. Use of white fluid for correction is <b>NOT</b> permissible on the Answer Sheet.	8. उत्तर पत्र पर किसी प्रकार के संशोधन हेतु व्हाइट फ्लूइड के प्रयोग की अनुमति <b>नहीं</b> है।

In case of any ambiguity in translation of any question, English version shall be treated as final.

प्रश्नों के अनुवाद में किसी अस्पष्टता की स्थिति में, अंग्रेजी संस्करण को ही अन्तिम माना जायेगा।

Name of the Candidate (in Capital letters) : \_\_\_\_\_

Roll Number : in figures :         in words : \_\_\_\_\_

Name of Examination Centre (in Capital letters) : \_\_\_\_\_

Candidate's Signature: \_\_\_\_\_ Invigilator's Signature: \_\_\_\_\_

**Resonance Eduventures Ltd.**

Pre Medical Division:- CG Tower-2, A-51(A), IPIA, Behind City Mall, Jhalawar Road, KOTA - 324005 (Rajasthan)

CORPORATE OFFICE : CG Tower, A-46 & 52, IPIA, Near City Mall, Jhalawar Road, Kota (Raj.) - 324005

Reg. Office : J-2, Jawahar Nagar, Main Road, Kota (Raj.)-324005 | Ph. No.: +91-744-3192222 | FAX No. : +91-022-39167222

Ph.No. : +91-744-3012222, 6635555 | To Know more : sms RESO at 56677

Website : www.resonance.ac.in | E-mail : [contact@resonance.ac.in](mailto:contact@resonance.ac.in) | CIN : U80302RJ2007PLC024029

Toll Free : 1800 258 5555 08003 444 888 facebook.com/ResonanceEdu twitter.com/ResonanceEdu www.youtube.com/resowatch blog.resonance.ac.in

This solution was download from Resonance NEET 2017 Solution portal

The most trusted Institute in Kota for IITJEE is now emerging as most promising and consistently growing institute for Pre-Medical

Total Selections in NEET 2016

**1787**

Classroom: 1155 | DLP+e-LP: 632

5 AIRs in TOP 100 | 43 AIRs in TOP 500

Total Selections in AIIMS 2016

**213**

Classroom: 32 | DLP+e-LP: 181

24 AIRs in TOP 200 | 77 AIRs in TOP 500

**TOP PERFORMERS FROM CLASSROOM**

**KARNATAKA STATE TOPPER**

**AIR-78**

**SURAJ M (VVS)**

ResoBASE Roll No.: 1019762  
Home State: Karnataka



**AIR-122**

**SANJAY M GOUDAR**

ResoBASE Roll No.: 1047136  
Home State: Karnataka



**AIR-121**

**Cat. Rank: 9**

**ADARSH PAL**

Studying in AIIMS, Delhi  
Home State: Uttar Pradesh



**AIR-181**

**Cat. Rank: 16**

**SHUBHA SONAM**

Studying in AIIMS, Delhi  
Home State: Chhattisgarh



**AIR-187**

**ASHUTOSH SAHU**

Reso Roll No.: 14500975  
Home State: Uttar Pradesh



**AIR-229**

**MANYA KUMAR**

Reso Roll No.: 14500423  
Home State: Rajasthan



**AIR-259**

**NEERAJ KUMAR**

Reso Roll No.: 13530030  
Home State: Maharashtra



**AIR-274**

**NIRMAL SINGH**

Reso Roll No.: 14550299  
Home State: Bihar



**ABHIGYAN A. CHAKRABORTY**

Reso Roll No.: 14500341  
Study Centre: Nasik | NEET-16: AIR (UR) 998  
AIIMS-16: AIR 480 | JIPMER-16: AIR 288  
Home State: Maharashtra



**HISTORICAL RESULT PRODUCED IN AFMC 2016**

BOYS Cat.

**AIR-4**

GIRLS Cat.

**GARGI CHATURVEDI**

Reso Roll No.: 970749  
Study Centre: Kota  
NEET-2016: AIR (UR) 659  
Also a PCDP Student Since Class-VII  
Home State: Rajasthan



**RESONANCE EDUVENTURES LTD.**

**PRE-MEDICAL DIVISION:** CG Tower-2, A-51 (A), IPIA, Behind City Mall, Jhalawar Road, Kota (Rajasthan) - 324005  
Mob.: 9314310966, 9352676055, 9352529244 | e-mail: premedical@resonance.ac.in

**CORPORATE OFFICE:** CG Tower, A-46 & 52, IPIA, Near City Mall, Jhalawar Road, Kota (Rajasthan) - 324005

**Reg. Office:** J-2, Jawahar Nagar Main Road, Kota (Raj.) - 05 | **Tel. No.:** 0744-3012100, 3012222, 6635555 | **CIN:** U80302RJ2007PLC024029

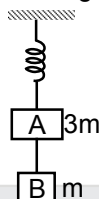
**To Know more:** sms RESO at 56677 | contact@resonance.ac.in | www.resonance.ac.in | Toll Free : 1800 258 5555

Scan & Apply Online



**(PHYSICS)**

91. Two blocks A and B of masses  $3m$  and  $m$  respectively are connected by a massless and inextensible string. The whole system is suspended by a massless spring as shown in figure. The magnitudes of acceleration of A and B immediately after the string is cut, are respectively :



- (1)  $g, \frac{g}{3}$                       (2)  $\frac{g}{3}, g$                       (3)  $g, g$                       (4)  $\frac{g}{3}, \frac{g}{3}$

Ans. (2)

92. The acceleration due to gravity at a height  $1$  km above the earth is the same as at a depth  $d$  below the surface of earth. Then :

- (1)  $d = \frac{1}{2}$  km                      (2)  $d = 1$  km                      (3)  $d = \frac{3}{2}$                       (4)  $d = 2$  km

Ans. (4)

93. A particle executes linear simple harmonic motion with an amplitude of  $3$  cm. When the particle is at  $2$  cm from the mean position, the magnitude of its velocity is equal to that of its acceleration. Then its time period in second is :

- (1)  $\frac{\sqrt{5}}{\pi}$                       (2)  $\frac{\sqrt{5}}{2\pi}$                       (3)  $\frac{4\pi}{\sqrt{5}}$                       (4)  $\frac{2\pi}{\sqrt{3}}$

Ans. (3)

94. The resistance of a wire is ' $R$ ' ohm. If it is melted and stretched to ' $n$ ' times its original length, its new resistance will be

- (1)  $nR$                       (2)  $\frac{R}{n}$                       (3)  $n^2R$                       (4)  $\frac{R}{n^2}$

Ans. (3)

95. A capacitor is charged by a battery. The battery is removed and another identical uncharged capacitor is connected in parallel. The total electrostatic energy of resulting system :

- (1) increases by a factor of 4                      (2) decreases by a factor 2  
(3) remains the same                      (4) increases by a factor of 2

Ans. (2)

## RESONANCE EDUVENTURES LTD.

Pre Medical Division:- CG Tower-2, A-51(A), IPIA, Behind City Mall, Jhalawar Road, KOTA - 324005 (Rajasthan)

CORPORATE OFFICE : CG TOWER, A-46 & 52, IPIA, NEAR CITY MALL, JHALAWAR ROAD, KOTA (RAJ.) - 324005

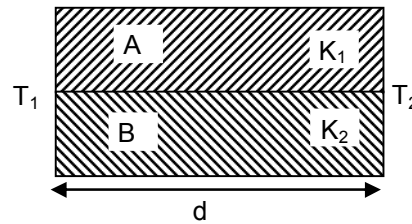
REG. OFFICE : J-2, JAWAHAR NAGAR, MAIN ROAD, KOTA (RAJ.)-324005 | PH. NO.: +91-744-3192222 | FAX NO. : +91-022-39167222

PH.NO. : +91-744-3012222, 6635555 | TO KNOW MORE : SMS RESO AT 56677

WEBSITE : WWW.RESONANCE.AC.IN | E-MAIL : CONTACT@RESONANCE.AC.IN | CIN : U80302RJ2007PLC024029

Toll Free : 1800 258 5555    08003 444 888    facebook.com/ResonanceEdu    twitter.com/ResonanceEdu    www.youtube.com/resowatch    blog.resonance.ac.in

96. Two rods A and B of different materials are welded together as shown in figure. Their thermal conductivities are  $K_1$  and  $K_2$ . The thermal conductivity of the composite rod will be



- (1)  $\frac{K_1 + K_2}{2}$       (2)  $\frac{3(K_1 + K_2)}{2}$       (3)  $K_1 + K_2$       (4)  $2(K_1 + K_2)$

Ans. (1)

97. The two nearest harmonics of a tube closed at one end and open at other end are 220 Hz and 260 Hz. What is the fundamental frequency of the system?

- (1) 10 Hz      (2) 20 Hz      (3) 30 Hz      (4) 40 Hz

Ans. (2)

98. The bulk modulus of a spherical object is 'B'. If it is subjected to uniform pressure 'p', the fractional decrease in radius is :

- (1)  $\frac{p}{B}$       (2)  $\frac{B}{3p}$       (3)  $\frac{3p}{B}$       (4)  $\frac{p}{3B}$

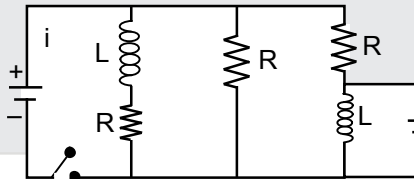
Ans. (4)

99. A physical quantity of the dimensions of length that can be formed out of  $c$ ,  $G$  and  $\frac{e^2}{4\pi\epsilon_0}$  is [c is velocity of light, G is universal constant of gravitation and e is charge] :

- (1)  $\frac{1}{c^2} \left[ G \frac{e^2}{4\pi\epsilon_0} \right]^{1/2}$       (2)  $c^2 \left[ G \frac{e^2}{4\pi\epsilon_0} \right]^{1/2}$       (3)  $\frac{1}{c^2} \left[ \frac{e^2}{G4\pi\epsilon_0} \right]^{1/2}$       (4)  $\frac{1}{c} G \frac{e^2}{4\pi\epsilon_0}$

Ans. (1)

100. Figure shows a circuit that contains three identical resistors with resistance  $R = 9.0 \Omega$  each, two identical inductors with inductance  $L = 2.0 \text{ mH}$  each and an ideal battery with emf  $\epsilon = 18 \text{ V}$ . The current 'i' through the battery just after the switch closed is.



- (1) 2 mA      (2) 0.2 A      (3) 2 A      (4) 0 ampere

Ans. Bonus

101. One end of string of length  $\ell$  is connected to a particle of mass 'm' and the other end is connected to a small peg on a smooth horizontal table. If the particle moves in circle with speed 'v' the net force on the particle (directed towards center) will be (T represents the tension in the string)

- (1) T      (2)  $T + \frac{mv^2}{\ell}$       (3)  $T - \frac{mv^2}{\ell}$       (4) zero

Ans. (1)

## RESONANCE EDUVENTURES LTD.

Pre Medical Division:- CG Tower-2, A-51(A), IPIA, Behind City Mall, Jhalawar Road, KOTA - 324005 (Rajasthan)

CORPORATE OFFICE : CG TOWER, A-46 & 52, IPIA, NEAR CITY MALL, JHALAWAR ROAD, KOTA (RAJ.) - 324005

REG. OFFICE : J-2, JAWAHAR NAGAR, MAIN ROAD, KOTA (RAJ.)-324005 | PH. NO.: +91-744-3192222 | FAX NO. : +91-022-39167222

PH.NO. : +91-744-3012222, 6635555 | TO KNOW MORE : SMS RESO AT 56677

WEBSITE : WWW.RESONANCE.AC.IN | E-MAIL : CONTACT@RESONANCE.AC.IN | CIN : U80302RJ2007PLC024029

Toll Free : 1800 258 5555    08003 444 888    facebook.com/ResonanceEdu    twitter.com/ResonanceEdu    www.youtube.com/resowatch    blog.resonance.ac.in

102. The photoelectric threshold wavelength of silver is  $3250 \times 10^{-10}$  m. The velocity of the electron ejected from a silver surface by ultraviolet light of wavelength  $2536 \times 10^{-10}$  m is :  
(Given  $h = 4.14 \times 10^{-15}$  eVs and  $c = 3 \times 10^8$  ms<sup>-1</sup>)  
(1)  $\approx 6 \times 10^5$  ms<sup>-1</sup>      (2)  $\approx 0.6 \times 10^6$  ms<sup>-1</sup>      (3)  $\approx 61 \times 10^3$  ms<sup>-1</sup>      (4)  $\approx 0.3 \times 10^6$  ms<sup>-1</sup>

Ans. (1, 2)

103. Radioactive material 'A' has decay constant ' $8\lambda$ ' and material 'B' has decay constant ' $\lambda$ '. Initially they have same number of nuclei. After what time, the ratio of number of nuclei of material 'B' to that 'A' will be  $\frac{1}{e}$  ?

- (1)  $\frac{1}{\lambda}$                       (2)  $\frac{1}{7\lambda}$                       (3)  $\frac{1}{8\lambda}$                       (4)  $\frac{1}{9\lambda}$

Ans. (2)

104. A rope is wound around a hollow cylinder of mass 3 kg and radius 40 cm. What is the angular acceleration of the cylinder if the rope is pulled with a force of 30N?

- (1) 25 m/s<sup>2</sup>                      (2) 0.25 rad/s<sup>2</sup>                      (3) 25 rad/s<sup>2</sup>                      (4) 5 m/s<sup>2</sup>

Ans. (3)

105. Two cars moving in opposite directions approach each other with speed of 22 m/s and 16.5 m/s respectively. The driver of the first car blows a horn having a frequency 400 Hz. The frequency heard by the driver of the second car is [velocity of sound 340 m/s] :

- (1) 350 Hz                      (2) 361 Hz                      (3) 411 Hz                      (4) 448 Hz

Ans. (4)

106. A 250 – Turn rectangular coil of length 2.1 cm and width 1.25 cm carries a current of 85  $\mu$ A are subjected to a magnetic field of strength 0.85T. Work done for rotating the coil by 180° against the torque is :

- (1) 9.1  $\mu$ J                      (2) 4.55  $\mu$ J                      (3) 2.3  $\mu$ J                      (4) 1.15  $\mu$ J

Ans. (1)

107. A long solenoid of diameter 0.1 m has  $2 \times 10^4$  turn per meter. At the centre of the solenoid, a coil of 100 turns and radius 0.01 m is placed with its axis coinciding with the solenoid axis. The current in the solenoid reduces at a constant rate to 0A from 4 A in 0.05 s. If the resistance of the coil is  $10\pi^2\Omega$ , the total charge flowing through the coil during this time is :

- (1) 32  $\pi\mu$ C                      (2) 16  $\mu$ C                      (3) 32  $\mu$ C                      (4) 16  $\pi\mu$ C

Ans. (3)

108. Suppose the charge of a proton and an electron differ slightly. One of them is  $-e$ , the other is  $(e + \Delta e)$ . If the net of electrostatic force and gravitational force between two hydrogen atoms placed at a distance  $d$  (much greater than atomic size) apart is zero, then  $\Delta e$  is of the order of [Given mass of hydrogen  $m_h = 1.67 \times 10^{-27}$  kg]

- (1)  $10^{-20}$  C                      (2)  $10^{-23}$  C                      (3)  $10^{-37}$  C                      (4)  $10^{-47}$  C

Ans. (3)

## RESONANCE EDUVENTURES LTD.

Pre Medical Division:- CG Tower-2, A-51(A), IPIA, Behind City Mall, Jhalawar Road, KOTA - 324005 (Rajasthan)

CORPORATE OFFICE : CG TOWER, A-46 & 52, IPIA, NEAR CITY MALL, JHALAWAR ROAD, KOTA (RAJ.) - 324005

REG. OFFICE : J-2, JAWAHAR NAGAR, MAIN ROAD, KOTA (RAJ.)-324005 | PH. NO.: +91-744-3192222 | FAX NO. : +91-022-39167222

PH.NO. : +91-744-3012222, 6635555 | TO KNOW MORE : SMS RESO AT 56677

WEBSITE : WWW.RESONANCE.AC.IN | E-MAIL : CONTACT@RESONANCE.AC.IN | CIN : U80302RJ2007PLC024029

Toll Free : 1800 258 5555    08003 444 888    facebook.com/ResonanceEdu    twitter.com/ResonanceEdu    www.youtube.com/resowatch    blog.resonance.ac.in

109. Two astronauts are floating in gravitational free space after having lost contact with their spaceship. The two will :
- (1) keep floating at the same distance between them
  - (2) move towards each other
  - (3) move away from each other
  - (4) will become stationary

Ans. (2)

110. The ratio of wavelengths of the last line of Balmer series and the last line of Lyman series is
- (1) 2
  - (2) 1
  - (3) 4
  - (4) 0.5

Ans. (3)

111. The de-Broglie wavelength of a neutron in thermal equilibrium with heavy water at a temperature T (Kelvin) and mass m, is :

- (1)  $\frac{h}{\sqrt{mkT}}$
- (2)  $\frac{h}{\sqrt{3mkT}}$
- (3)  $\frac{2h}{\sqrt{3mkT}}$
- (4)  $\frac{2h}{\sqrt{mkT}}$

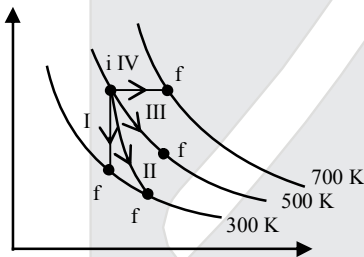
Ans. (2)

112. A thin prism having refracting angle  $10^\circ$  is made of glass of refractive index 1.42. This prism is combined with another thin prism of glass of refractive index 1.7. This combination produces dispersion without deviation. The refracting angle of second prism should be :

- (1)  $4^\circ$
- (2)  $6^\circ$
- (3)  $8^\circ$
- (4)  $10^\circ$

Ans. (2)

113. Thermodynamic processes are indicated in the following diagram:



Match the following :

	Column-1	Column-2
P	Process I	a. Adiabatic
Q	Process II	b. Isobaric
R	Process III	c. Isochoric
S	Process IV	d. Isothermal
(1)	P → a, Q → c, R → d, S → b	(2) P → c, Q → a, R → d, S → b
(3)	P → c, Q → d, R → b, S → a	(4) P → d, Q → b, R → a, S → c

Ans. (2)

## RESONANCE EDUVENTURES LTD.

Pre Medical Division:- CG Tower-2, A-51(A), IPIA, Behind City Mall, Jhalawar Road, KOTA - 324005 (Rajasthan)

CORPORATE OFFICE : CG TOWER, A-46 & 52, IPIA, NEAR CITY MALL, JHALAWAR ROAD, KOTA (RAJ.) - 324005

REG. OFFICE : J-2, JAWAHAR NAGAR, MAIN ROAD, KOTA (RAJ.)-324005 | PH. NO.: +91-744-3192222 | FAX NO. : +91-022-39167222

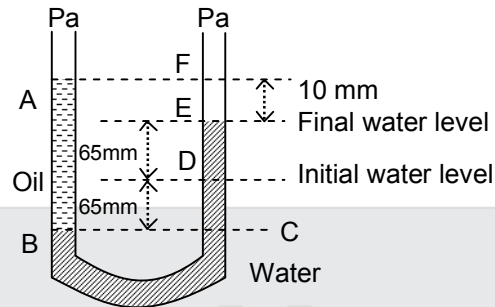
PH.NO. : +91-744-3012222, 6635555 | TO KNOW MORE : SMS RESO AT 56677

WEBSITE : WWW.RESONANCE.AC.IN | E-MAIL : CONTACT@RESONANCE.AC.IN | CIN : U80302RJ2007PLC024029

Toll Free : 1800 258 5555 | 08003 444 888 | facebook.com/ResonanceEdu | twitter.com/ResonanceEdu | www.youtube.com/resowatch | blog.resonance.ac.in



114. A U tube with both ends open to the atmosphere, is partially filled with water. Oil, which is immiscible with water, is poured into one side until it stands at a distance of 10 mm above the water level on the other side. Meanwhile the water rises by 65 mm from its original level (see diagram). The density of the oil is :



- (1)  $650 \text{ kg m}^{-3}$       (2)  $425 \text{ kg m}^{-3}$       (3)  $800 \text{ kg m}^{-3}$       (4)  $928 \text{ kg m}^{-3}$
- Ans. (4)
115. A spring of force constant  $k$  is cut into lengths of ratio  $1 : 2 : 3$ . They are connected in series and the new force constant is  $k'$ . Then they are connected in parallel and force constant is  $k''$ . Then  $k' : k''$  is :
- (1)  $1 : 6$       (2)  $1 : 9$       (3)  $1 : 11$       (4)  $1 : 14$
- Ans. (3)
116. Which of the following statements are correct?
- (a) Centre of mass of a body always coincides with the centre of gravity of the body.  
 (b) Centre of mass of a body is the point at which the total gravitational torque on the body is zero.  
 (c) A couple on a body produce both translational and rotational motion in a body.  
 (d) Mechanical advantage greater than one means that small effort can be used to lift a large load.
- (1) (b) and (d)      (2) (a) and (b)      (3) (b) and (c)      (4) (c) and (d)
- Ans. (1)
117. A beam of light from a source  $L$  is incident normally on a plane mirror fixed at a certain distance  $x$  from the source. The beam is reflected back as a spot on a scale placed just above the source  $L$ . When the mirror is rotated through a small angle  $\theta$ , the spot of the light is found to move through a distance  $y$  on the scale. The angle  $\theta$  is given by :
- (1)  $\frac{y}{2x}$       (2)  $\frac{y}{x}$       (3)  $\frac{x}{2y}$       (4)  $\frac{x}{y}$
- Ans. (1)
118. A gas mixture consists of 2 moles of  $\text{O}_2$  and 4 moles of Ar at temperature  $T$ . Neglecting all vibrational modes, the total internal energy of the system is :
- (1)  $4 RT$       (2)  $15 RT$       (3)  $9 RT$       (4)  $11 RT$
- Ans. (4)

## RESONANCE EDUVENTURES LTD.

Pre Medical Division:- CG Tower-2, A-51(A), IPIA, Behind City Mall, Jhalawar Road, KOTA - 324005 (Rajasthan)

CORPORATE OFFICE : CG TOWER, A-46 & 52, IPIA, NEAR CITY MALL, JHALAWAR ROAD, KOTA (RAJ.) - 324005

REG. OFFICE : J-2, JAWAHAR NAGAR, MAIN ROAD, KOTA (RAJ.)-324005 | PH. NO.: +91-744-3192222 | FAX NO. : +91-022-39167222

PH.NO. : +91-744-3012222, 6635555 | TO KNOW MORE : SMS RESO AT 56677

WEBSITE : WWW.RESONANCE.AC.IN | E-MAIL : CONTACT@RESONANCE.AC.IN | CIN : U80302RJ2007PLC024029

Toll Free : 1800 258 5555    08003 444 888    facebook.com/ResonanceEdu    twitter.com/ResonanceEdu    www.youtube.com/resowatch    blog.resonance.ac.in

**119.** Consider a drop of rain water having mass 1 g falling from a height of 1 km. It hits the ground with a speed of 50 m/s. Take 'g' constant with a value 10 m/s<sup>2</sup>. The work done by the (i) gravitational force and the (ii) resistive force of air is :

- (1) (i) – 10 J      (ii) – 8.25 J                                  (2) (i) 1.25 J      (ii) – 8.25 J  
(3) (i) 100 J      (ii) 8.75 J    (4) (i) 10 J      (ii) – 8.75 J

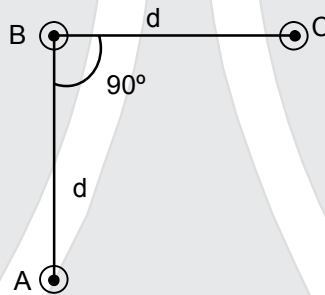
**Ans. (4)**

**120.** A carnot engine having an efficiency of  $\frac{1}{10}$  as heat engine, is used as a refrigerator. If the work done on the system is 10 J, the amont of energy absorbed from the reservoir at lower temperature is :

- (1) 1 J                                  (2) 90 J                                  (3) 99 J                                  (4) 100 J

**Ans. (2)**

**121.** An arrangement of three parallel straight wires placed perpendicular to plane of paper carrying same current 'I' along the same direction is shown in figure. Magnitude of force per unit length on the middle wire 'B' is given by



- (1)  $\frac{\mu_0 I^2}{2\pi d}$                                   (2)  $\frac{2\mu_0 I^2}{\pi d}$                                   (3)  $\frac{\sqrt{2}\mu_0 I^2}{\pi d}$                                   (4)  $\frac{\mu_0 I^2}{\sqrt{2}\pi d}$

**Ans. (4)**

**122.** The x and y corrdinates of the particle at any time are  $x = 5t - 2t^2$  and  $y = 410t$  respectively, where x and y are in meters and t in seconds. The acceleration of the particle at  $t = 2s$  is :

- (1) 0                                  (2) 5 m/s<sup>2</sup>                                  (3) – 4m/s<sup>2</sup>                                  (4) – 8 m/s<sup>2</sup>

**Ans. (3)**

**123.** The ratio of resolving powers of an optical microscope for two wavelengths  $\lambda_1 = 4000 \text{ \AA}$  and  $\lambda_2 = 6000 \text{ \AA}$  is :

- (1) 8 : 27                                  (2) 9 : 4                                  (3) 3 : 2                                  (4) 16 : 81

**Ans. (3)**

## RESONANCE EDUVENTURES LTD.






Pre Medical Division:- CG Tower-2, A-51(A), IPIA, Behind City Mall, Jhalawar Road, KOTA - 324005 (Rajasthan)

**CORPORATE OFFICE :** CG TOWER, A-46 & 52, IPIA, NEAR CITY MALL, JHALAWAR ROAD, KOTA (RAJ.) - 324005

**REG. OFFICE :** J-2, JAWAHAR NAGAR, MAIN ROAD, KOTA (RAJ.)-324005 | **PH. NO.:** +91-744-3192222 | **FAX NO.:** +91-022-39167222

**PH.NO. :** +91-744-3012222, 6635555 | **TO KNOW MORE :** SMS RESO AT 56677

**WEBSITE :** WWW.RESONANCE.AC.IN | **E-MAIL :** CONTACT@RESONANCE.AC.IN | **CIN :** U80302RJ2007PLC024029

**Toll Free : 1800 258 5555**  08003 444 888  facebook.com/ResonanceEdu  twitter.com/ResonanceEdu  www.youtube.com/resowatch  blog.resonance.ac.in



124. Preeti reached the metro station and found that the escalator was not working. She walked up the stationary escalator in time  $t_1$ . On other days, if she remains stationary on the moving escalator, then the escalator takes her up in time  $t_2$ . The time taken by her to walk up on the moving escalator will be :

- (1)  $\frac{t_1 + t_2}{2}$                       (2)  $\frac{t_1 t_2}{t_2 - t_1}$                       (3)  $\frac{t_1 t_2}{t_2 + t_1}$                       (4)  $t_1 - t_2$

Ans. (3)

125. A spherical black body with a radius of 12 cm radiates 450 watt power at 500 K. If the radius were halved and the temperature doubled, the power radiated in watt would be :

- (1) 225                      (2) 450                      (3) 1000                      (4) 1800

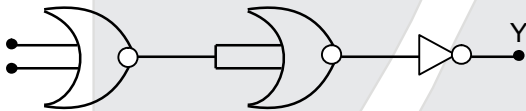
Ans. (4)

126. A potentiometer is an accurate and versatile device to make electrical measurements of E.M.F. because the method involves :

- (1) cells  
(2) potential gradients  
(3) a condition of no current flow through the galvanometer  
(4) a combination of cells, galvanometer and resistance

Ans. (3)

127. The given electrical network is equivalent to



- (1) AND gate                      (2) OR gate                      (3) NOR gate                      (4) NOT gate

Ans. (3)

128. In a common emitter transistor amplifier the audio signal voltage across the collector is 3V. The resistance of collector is 3 kΩ. If current gain is 100 and the base resistance is 2kΩ, the voltage and power gain of the amplifier is :

- (1) 200 and 1000                      (2) 15 and 200                      (3) 150 and 15000                      (4) 20 and 2000

Ans (3)

129. Two discs of same moment of inertia rotating about their regular axis passing through centre and perpendicular to the plane of disc with angular velocities  $\omega_1$  and  $\omega_2$ . They are brought into contact face to face coinciding the axis of rotation. The expression for loss of energy during this process is :

- (1)  $\frac{1}{2}(\omega_1 + \omega_2)^2$                       (2)  $\frac{1}{4}(\omega_1 - \omega_2)^2$                       (3)  $I(\omega_1 - \omega_2)^2$                       (4)  $\frac{1}{8}(\omega_1 - \omega_2)^2$

Ans. (2)

## RESONANCE EDUVENTURES LTD.

Pre Medical Division:- CG Tower-2, A-51(A), IPIA, Behind City Mall, Jhalawar Road, KOTA - 324005 (Rajasthan)

CORPORATE OFFICE : CG TOWER, A-46 & 52, IPIA, NEAR CITY MALL, JHALAWAR ROAD, KOTA (RAJ.) - 324005

REG. OFFICE : J-2, JAWAHAR NAGAR, MAIN ROAD, KOTA (RAJ.)-324005 | PH. NO.: +91-744-3192222 | FAX NO. : +91-022-39167222

PH.NO. : +91-744-3012222, 6635555 | TO KNOW MORE : SMS RESO AT 56677

WEBSITE : WWW.RESONANCE.AC.IN | E-MAIL : CONTACT@RESONANCE.AC.IN | CIN : U80302RJ2007PLC024029

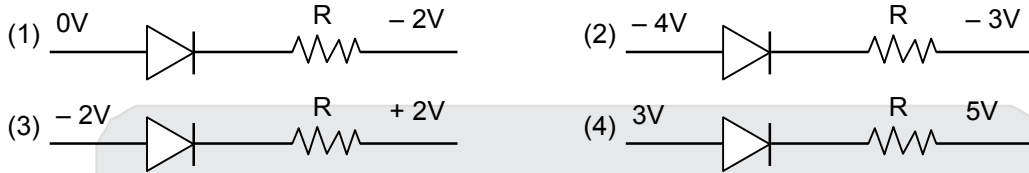
Toll Free : 1800 258 5555    08003 444 888    facebook.com/ResonanceEdu    twitter.com/ResonanceEdu    www.youtube.com/resowatch    blog.resonance.ac.in

130. Young's double slit experiment is first performed in air and then in a medium other than air. It is found that 8<sup>th</sup> bright fringe in the medium lies where 5<sup>th</sup> dark fringe lies in air. The refractive index of the medium is nearly :

- (1) 1.25                      (2) 1.59                      (3) 1.69                      (4) 1.78

Ans. (4)

131. Which one of the following represents forward bias diode?



Ans. (1)

132. Two polaroids P<sub>1</sub> and P<sub>2</sub> are placed with their axis perpendicular to each other. Unpolarised light I<sub>0</sub> is incident on P<sub>1</sub>. A third Polaroid P<sub>3</sub> is kept in between P<sub>1</sub> and P<sub>2</sub> such that its axis makes an angle 45° with that of P<sub>1</sub>. The intensity of transmitted light through P<sub>2</sub> is :

- (1)  $\frac{I_0}{2}$                       (2)  $\frac{I_0}{4}$                       (3)  $\frac{I_0}{8}$                       (4)  $\frac{I_0}{16}$

Ans. (3)

133. In an electromagnetic wave in free space the root mean square value of the electric field is E<sub>rms</sub> = 6V/m. The peak value of the magnetic field is :

- (1)  $1.41 \times 10^{-8}$  T                      (2)  $2.83 \times 10^{-8}$  T                      (3)  $0.70 \times 10^{-8}$  T                      (4)  $4.23 \times 10^{-8}$  T

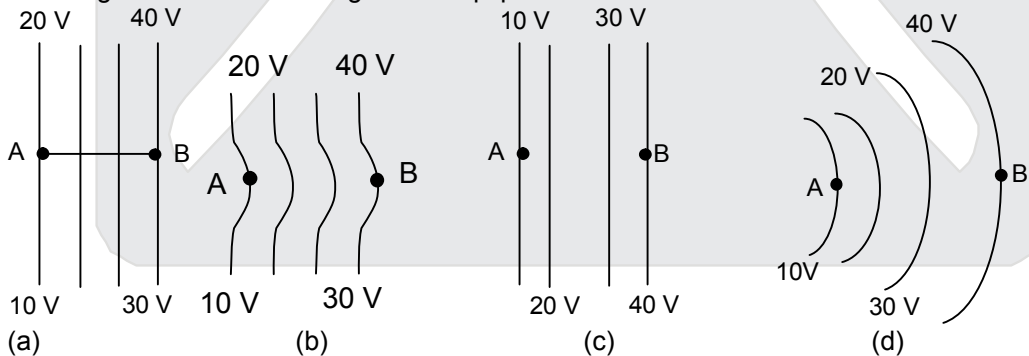
Ans. (2)

134. If  $\theta_1$  and  $\theta_2$  be the apparent angles of dip observed in two vertical planes at right angles to each other, then the true angle of dip  $\theta$  is given by

- (1)  $\cot^2 \theta = \cot^2 \theta_1 + \cot^2 \theta_2$                       (2)  $\tan^2 \theta = \tan^2 \theta_1 + \tan^2 \theta_2$   
(3)  $\cot^2 \theta = \cot^2 \theta_1 - \cot^2 \theta_2$                       (4)  $\tan^2 \theta = \tan^2 \theta_1 - \tan^2 \theta_2$

Ans. (1)

135. The diagrams below show regions of equipotentials.



A positive charge is moved from A to B in each diagram

- (1) Maximum work is required to move q in figure (c).  
(2) In all the four cases the work done is the same.  
(3) Minimum work is required to move q in figure (a)  
(4) Maximum work is required to move q in figure (b).

Ans. (2)

## RESONANCE EDUVENTURES LTD.

Pre Medical Division:- CG Tower-2, A-51(A), IPIA, Behind City Mall, Jhalawar Road, KOTA - 324005 (Rajasthan)


CORPORATE OFFICE : CG TOWER, A-46 & 52, IPIA, NEAR CITY MALL, JHALAWAR ROAD, KOTA (RAJ.) - 324005

REG. OFFICE : J-2, JAWAHAR NAGAR, MAIN ROAD, KOTA (RAJ.)-324005 | PH. NO.: +91-744-3192222 | FAX NO. : +91-022-39167222

PH.NO. : +91-744-3012222, 6635555 | TO KNOW MORE : SMS RESO AT 56677

WEBSITE : WWW.RESONANCE.AC.IN | E-MAIL : CONTACT@RESONANCE.AC.IN | CIN : U80302RJ2007PLC024029

Toll Free : 1800 258 5555 | 08003 444 888 | facebook.com/ResonanceEdu | twitter.com/ResonanceEdu | www.youtube.com/resowatch | blog.resonance.ac.in



**Resonance<sup>®</sup>**  
Educating for better tomorrow

# CREATES HISTORY NATIONALLY IN JEE (MAIN) 2017



# 1

**ALL INDIA RANK**  
**KALPIT VEERWAL**

Reso Roll No.: 12405642  
Resonance Udaipur Classroom Student Since Class VIII

First time in the  
history of JEE (Main)  
Examination

# 360/360

**AIR-5**



**VISHWAJEET AGRAWAL**

Reso Roll No.:15101858  
Study Centre: Kota

Classroom Student Since Class-XI

**Best Rank from Kota City**

**FROM CLASSROOM PROGRAM | 2 students in top-10 (Gen) | 10 students in top-100 (Gen)**

**AIR-15**



**DEEPANK AGARWAL**

Reso Roll No.:15141970  
Study Centre: Kota

Classroom Student Since Class-XI

**AIR-27**



**ANIKET GUPTA**

Reso Roll No.:15180341  
Study Centre: Kota

Classroom Student Since Class-XI

**AIR-44**



**PRAAGY RASTOGI**

Reso Roll No.:13414790  
Study Centre: Nagpur

Classroom Student Since Class-IX

**AIR-52**



**DEVANSH SHRINGI**

Reso Roll No.:13400773  
Study Centre: Kota

Classroom Student Since Class-IX

**AIR-54**



**NINAD HEMANTH HUIGOL**

ResoBASE Roll No.:1030035  
Study Centre: Kota

Classroom Student Since Class-IX

**AIR-82**



**SHIVAM GOYAL**

Reso Roll No.:15102189  
Study Centre: Kota

Classroom Student Since Class-XI

**AIR-93**



**SUMANTH R HEGDE**

ResoBASE Roll No.: 1029376  
Study Centre: Kota

Classroom Student Since Class-IX

**AIR-94**



**SAHIL SINGH**

Reso Roll No.:15143340  
Study Centre: Kota

Classroom Student Since Class-XI

## Result @ Resonance

Total Students Qualified  
for JEE (Advanced)

# 13225\*

Classroom: 9157 | DLP+ELP: 4068

Total Students selected  
in JEE (Main)

# 23356\*

Classroom: 17360 | DLP+ELP: 5996

\* Result received so far

## ADMISSIONS OPEN (FOR 2017-18)

**Classes: V to XII & XII+**

- JEE (MAIN+ADVANCED) • JEE (MAIN) • NEET
- AIIMS • BOARD/ IJSO/ OLYMPIADS/ NTSE/ KVPY

Entrance Test Dates  
@ 101 Cities Across India:

**14<sup>th</sup> & 28<sup>th</sup> MAY**

Scan &  
Apply Online



## RESONANCE EDUVENTURES LTD.

**Corporate Office:** CG Tower, A-46 & 52, IPIA, Near City Mall, Jhalawar Road, Kota (Rajasthan)- 324005

**Registered Office:** J-2, Jawahar Nagar Main Road, Kota (Rajasthan)- 324005 | **Tel. No.:** 0744-3012100, 3012222, 6635555 | **CIN:** U80302RJ2007PLC024029

**STUDY CENTRES (Self Owned):** Jaipur: 0141-6060661 | Bhubaneswar, Udaipur, Jodhpur, Agra, Ranchi, Allahabad, Aurangabad, Jabalpur, Raipur, Gwalior, Vadodara, Surat: (STD Code) 6060660  
Bhopal: 0755-6060660 | Indore: 0731-4046267 | Lucknow: 0522-3192222 | Nagpur: 0712-3017222 | Patna: 9304002215 | Kolkata, Mumbai, Ahmedabad: (STD Code) 6060660  
Delhi: 011-60606601 | Nanded: 02462-250220 | Chandrapur: 07172-606066 | Gandhinagar: 079-60606611 | Nashik: 0253-6090028 | Rajkot: 0281-6002011

Toll Free: 1800 258 5555 | To know more: sms RESO at 56677 | Website: [www.resonance.ac.in](http://www.resonance.ac.in) | Email: [contact@resonance.ac.in](mailto:contact@resonance.ac.in)

