



Resonance[®]
Educating for better tomorrow

CBSE

**CENTRAL BOARD SECONDARY
EXAMINATION**

2023

**CLASS
XII**

Questions & Solutions

Date: 11 March 2023 | TIME : (10:30 a.m. to 01:30 p.m)

Duration: 3 hr | Max. Marks: 80






SUBJECT: MATHEMATICS

Resonance Eduventures Ltd.

Reg. Office & Corp. Office : CG Tower, A-46 & 52, IPIA, Near City Mall, Jhalawar Road, Kota (Raj.) - 324005

Ph. No.: +91-744-2777777, 2777700 | FAX No. : +91-022-39167222

To Know more : sms RESO at 56677 | Website : www.resonance.ac.in | E-mail : contact@resonance.ac.in | CIN : U80302RJ2007PLC024029

Toll Free : 1800 258 5555  7340010333  facebook.com/ResonanceEdu  twitter.com/ResonanceEdu  www.youtube.com/resowatch  blog.resonance.ac.in

This solution was download from Resonance Solution portal

Roll No.

--	--	--	--	--	--	--	--	--	--

Candidates must write the Q.P. Code on the title page of the answer-book

MATHEMATICS

Time allowed : 3 Hours

Maximum Marks : 80

Note :

- (i) Please check that this question paper contains 23 printed pages.
- (ii) Q.P. Code given on the right hand side of the question paper should be written on the title page of the answer -book by the candidate.
- (iii) Please check that this question paper contains 38 questions.
- (iv) Please write down the serial number of the question- in the answer book before attempting it.
- (v) 15 minute time has been allotted to read this question paper. The question paper will be distributed at 10.15 a.m. From 10.15 a.m. to 10.30 a.m., the candidates will read the question paper only and will not write any answer on the answer-book during this period .

General Instructions :

Read the following instructions very carefully and follow them:






- (i) This Question Paper contains 38 questions. All questions are compulsory.
- (ii) Question paper is divided into **FIVE** Sections - Section **A, B, C, D** and **E**.
- (iii) In **Section A** - Question Nos. **1** to **18** are Multiple Choice Questions (MCQs) and Question Nos. 19 & 20 are Assertion-Reason based questions of 1 mark each.
- (iv) In **Section B** - Question Nos. **21** to **25** are Very Short Answer (VSA) type questions of 2 marks each.
- (v) In **Section C** - Question Nos. **26** to **31** are Short Answer (SA) type questions, carrying 3 marks each.
- (vi) In **Section D** - Question Nos. **32** to **35** are Long Answer (LA) type questions carrying 5 marks each.
- (vii) In **Section E** - Question Nos. **36** to **38** are source based/case based/passage based/integrated units of assessment questions carrying 4 marks each.
- (viii) There is no overall choice. However, an internal choice has been provided in **2** questions in Section **B**, **3** questions in Section **C**, **2** questions in Section **D** and **2** questions in Section **E**.
- (ix) Use of calculators is **NOT** allowed.

Resonance Eduventures Ltd.

Reg. Office & Corp. Office : CG Tower, A-46 & 52, IPIA, Near City Mall, Jhalawar Road, Kota (Raj.) - 324005

Ph. No.: +91-744-2777777, 2777700 | FAX No. : +91-022-39167222

To Know more : sms RESO at 56677 | Website : www.resonance.ac.in | E-mail : contact@resonance.ac.in | CIN : U80302RJ2007PLC024029

Toll Free : 1800 258 5555  7340010333  facebook.com/ResonanceEdu  twitter.com/ResonanceEdu  www.youtube.com/resowatch  blog.resonance.ac.in

SECTION - A

(Multiple Choice Questions)

Each question carries 1 mark.

- If the angle between \vec{a} and \vec{b} is $\frac{\pi}{3}$ and $|\vec{a} \times \vec{b}| = 3\sqrt{3}$, then the value of $\vec{a} \cdot \vec{b}$ is **1**

(A) 9 (B) 3 (C) $\frac{1}{9}$ (D) $\frac{1}{3}$
- The position vectors of three consecutive vertices of a parallelogram ABCD are $(4\hat{i} + 2\hat{j} - 6\hat{k})$, $B(5\hat{i} - 3\hat{j}) + \hat{k}$ and C $(12\hat{i} + 4\hat{j} + 5\hat{k})$. The position vector of D is given by : **1**

(A) $-3\hat{i} - 5\hat{j} - 10\hat{k}$ (B) $21\hat{i} + 3\hat{j}$ (C) $11\hat{i} + 9\hat{j} - 2\hat{k}$ (D) $-11\hat{i} - 9\hat{j} + 2\hat{k}$
- If for two events A and B, $P(A - B) = \frac{1}{5}$ and $P(A) = \frac{3}{5}$, then $P\left(\frac{B}{A}\right)$ is equal to **1**

(A) $\frac{1}{2}$ (B) $\frac{3}{5}$ (C) $\frac{2}{5}$ (D) $\frac{2}{3}$
- If $\int_0^{2\pi} \cos^2 x dx = k \int_0^{\frac{\pi}{2}} \cos^2 x dx$, then the value of k is **1**

(A) 4 (B) 2 (C) 1 (D) 0
- If (a,b), (c,d), and (e,f) are the vertices of ΔABC and Δ denotes the area of ΔABC , then $\begin{vmatrix} a & c & e \\ b & d & f \\ 1 & 1 & 1 \end{vmatrix}$ is equal to **1**

(A) $2\Delta^2$ (B) $4\Delta^2$ (C) 2Δ (D) 4Δ
- The function $f(x) = x|x|$ is **1**

(A) continuous and differentiable at $x = 0$
 (B) continuous but not differentiable at $x = 0$
 (C) differentiable but not continuous at $x = 0$
 (D) neither differentiable nor continuous at $x = 0$
- If $\tan\left(\frac{x+y}{x-y}\right) = k$, then $\frac{dy}{dx}$ is equal to **1**

(A) $\frac{-y}{x}$ (B) $\frac{y}{x}$ (C) $\sec^2\left(\frac{y}{x}\right)$ (D) $-\sec^2\left(\frac{y}{x}\right)$

Resonance Eduventures Ltd.

Reg. Office & Corp. Office : CG Tower, A-46 & 52, IPIA, Near City Mall, Jhalawar Road, Kota (Raj.) - 324005

Ph. No.: +91-744-2777777, 2777700 | FAX No. : +91-022-39167222

To Know more : sms RESO at 56677 | Website : www.resonance.ac.in | E-mail : contact@resonance.ac.in | CIN : U80302RJ2007PLC024029

Toll Free : 1800 258 5555 | 7340010333 | [facebook.com/ResonanceEdu](https://www.facebook.com/ResonanceEdu) | twitter.com/ResonanceEdu | www.youtube.com/resowatch | blog.resonance.ac.in

8. The objective function $Z = ax + by$ of an LPP has maximum value 42 at (4,6) and minimum value 19 at (3,2). Which of the following is true? **1**
 (A) $a = 9, b = 1$ (B) $a = 5, b = 2$ (C) $a = 3, b = 5$ (D) $a = 5, b = 3$
9. The corner points of the feasible region of a linear programming problem are (0, 4), (8, 0) and $(\frac{20}{3}, \frac{4}{3})$. If $Z = 30x + 24y$ is the objective function, then (maximum value of Z - minimum value of Z) is equal to **1**
 (A) 40 (B) 96 (C) 120 (D) 136
10. Number of symmetric matrices of order 3×3 with each entry 1 or -1 is **1**
 (A) 512 (B) 64 (C) 8 (D) 4
11. If $\begin{bmatrix} 2 & 0 \\ 5 & 4 \end{bmatrix} = P+Q$, where P is a symmetric and Q is a skew symmetric matrix, then Q is equal to **1**
 (A) $\begin{bmatrix} 2 & 5/2 \\ 5/2 & 4 \end{bmatrix}$ (B) $\begin{bmatrix} 0 & -5/2 \\ 5/2 & 0 \end{bmatrix}$ (C) $\begin{bmatrix} 0 & 5/2 \\ -5/2 & 0 \end{bmatrix}$ (D) $\begin{bmatrix} 2 & -5/2 \\ 5/2 & 4 \end{bmatrix}$
12. If $\begin{bmatrix} 1 & 2 & 1 \\ 2 & 3 & 1 \\ 3 & a & 1 \end{bmatrix}$ is non-singular matrix and $a \in A$, then the set A is **1**
 (A) R (B) {0} (C) {4} (D) $R - \{4\}$
13. If $|A| = k|A|$, where A is a square matrix of order 2, then sum of all possible values of k is **1**
 (A) 1 (B) -1 (C) 2 (D) 0
14. If $\frac{d}{dx} [f(x)] = ax + b$ and $f(0) = 0$, then $f(x)$ is equal to **1**
 (A) $a + b$ (B) $\frac{ax^2}{2} + bx$ (C) $\frac{ax^2}{2} + bx + c$ (D) b
15. Degree of the differential equation $\sin x + \cos \left(\frac{dy}{dx}\right) = y^2$ is **1**
 (A) 2 (B) 1 (C) not defined (D) 0
16. The integrating factor of the differential equation $(1 - y^2) \frac{dy}{dx} + yx = ay$, ($-1 < y < 1$) is **1**
 (A) $\frac{1}{y^2 - 1}$ (B) $\frac{1}{\sqrt{y^2 - 1}}$ (C) $\frac{1}{1 - y^2}$ (D) $\frac{1}{\sqrt{1 - y^2}}$
17. Unit vector along \overrightarrow{PQ} , where coordinates of P and Q respectively are (2, 1, -1) and (4, 4, -7), is **1**
 (A) $2\hat{i} + 3\hat{j} - 6\hat{k}$ (B) $-2\hat{i} - 3\hat{j} + 6\hat{k}$ (C) $\frac{-2\hat{i} - 3\hat{j} + 6\hat{k}}{7}$ (D) $\frac{2\hat{i} + 3\hat{j} - 6\hat{k}}{7}$

Resonance Eduventures Ltd.

Reg. Office & Corp. Office : CG Tower, A-46 & 52, IPIA, Near City Mall, Jhalawar Road, Kota (Raj.) - 324005

Ph. No.: +91-744-2777777, 2777700 | FAX No. : +91-022-39167222

To Know more : sms RESO at 56677 | Website : www.resonance.ac.in | E-mail : contact@resonance.ac.in | CIN : U80302RJ2007PLC024029

Toll Free : 1800 258 5555 | 7340010333 | [facebook.com/ResonanceEdu](https://www.facebook.com/ResonanceEdu) | twitter.com/ResonanceEdu | www.youtube.com/resowatch | blog.resonance.ac.in

18. Equation of a line passing through point (1, 2, 3) and equally inclined to the coordinate axis, is 1

(A) $\frac{x}{1} = \frac{y}{2} = \frac{z}{3}$

(B) $\frac{x}{1} = \frac{y}{1} = \frac{z}{1}$

(C) $\frac{x-1}{1} = \frac{y-1}{2} = \frac{z-1}{3}$

(D) $\frac{x-1}{1} = \frac{y-2}{1} = \frac{z-3}{1}$

ASSERTION-REASON BASED QUESTIONS

In the following questions 19 & 20, a statement of Assertion (A) is followed by a statement of Reason (R).

Choose the correct answer out of the following choices:

(A) Both (A) and (R) are true and (R) is the correct explanation of (A).

(B) Both (A) and (R) are true, but (R) is not the correct explanation of (A).

(C) (A) is true, but (R) is false.

(D) (A) is false, but (R) is true.

19. Assertion (A) : Maximum value of $(\cos^{-1} x)^2$ is π^2 .

Reason (R) : Range of the principal value branch of $\cos^{-1}x$ is $\left[\frac{-\pi}{2}, \frac{\pi}{2}\right]$

20. Assertion (A): If a line makes angles α, β, γ with positive direction of the coordinate axes, then $\sin^2 \alpha + \sin^2 \beta + \sin^2 \gamma = 2$.

Reason (R) : The sum of squares of the direction cosines of a line is 1.

SECTION - B

This section comprises of Very Short Answer Type (VSA) questions, each of 2 marks.

21. If points A, B and C have position vectors $2\hat{i}, \hat{j}$ and $2\hat{k}$ respectively, then show that ΔABC is an isosceles triangle. 2

22. (a) Evaluate $\sin^{-1}\left(\sin\frac{3\pi}{4}\right) + \cos^{-1}(\cos \pi) + \tan^{-1}(1)$. 2

OR

(b) Draw the graph of $\cos^{-1} x$, where $x \in [-1, 0]$. Also, write its range.

23. If equal sides of an isosceles triangle with fixed base 10 cm are increasing at the rate of 4 cm/sec, how fast is the area of triangle increasing at an instant when all sides become equal? 2

24. Find the coordinates of points on line $\frac{x}{1} = \frac{y-1}{2} = \frac{z+1}{2}$ which are at a distance of $\sqrt{11}$ units from origin. 2

25. (a) If $y = \sqrt{ax+b}$ then prove that $y \left(\frac{d^2y}{dx^2}\right) + \left(\frac{dy}{dx}\right)^2 = 0$ 2

OR

(b) $f(x) = \begin{cases} ax + b; & 0 < x \leq 1 \\ 2x^2 - x; & 1 < x < 2 \end{cases}$ is a differentiable function in $(0, 2)$, then find the values of a and b

Resonance Eduventures Ltd.

Reg. Office & Corp. Office : CG Tower, A-46 & 52, IPIA, Near City Mall, Jhalawar Road, Kota (Raj.) - 324005

Ph. No.: +91-744-2777777, 2777700 | FAX No. : +91-022-39167222

To Know more : sms RESO at 56677 | Website : www.resonance.ac.in | E-mail : contact@resonance.ac.in | CIN : U80302RJ2007PLC024029

Toll Free : 1800 258 5555 | 7340010333 | facebook.com/ResonanceEdu | twitter.com/ResonanceEdu | www.youtube.com/resowatch | blog.resonance.ac.in

SECTION - C

The section comprises Short Answer (SA) type question of 3 marks each.

26. Solve the following Linear programming problem graphically: 3

Maximize : $Z = 3x + 3.5y$

Subject to constraints: $x + 2y \geq 240$.

$3x + 1.5y \geq 270$,

$1.5x + 2y \leq 310$,

$x \geq 0, y \geq 0$.

27. (a) Find $\int \frac{x+2}{\sqrt{x^2-4x-5}} dx$. 3

OR

- (b) Evaluate $\int_{-a}^a f(x) dx$, where $f(x) = \frac{9^x}{1+9^x}$ 3

28. Find $\int e^{\cot^{-1} x} \left(\frac{1-x+x^2}{1+x^2} \right) dx$ 3

29. Evaluate $\int_{\log \sqrt{2}}^{\log \sqrt{3}} \frac{1}{(e^x + e^{-x})(e^x - e^{-x})} dx$. 3

30. (a) Find the general solution of the differential equation:
 $(xy - x^2) dy = y^2 dx$ 3

OR

- (b) Find the general solution of the differential equation:
 $(x^2+1) \frac{dy}{dx} + 2xy = \sqrt{x^2+4}$ 3

31. (a) Two numbers are selected from first six even natural numbers at random without replacement. If X denotes the greater of two numbers selected, find the probability distribution of X. 3

OR

- (b) A fair coin and an unbiased die are tossed. Let A be the event, "Head appears on the coin" and B be the event, "3 comes on the die". Find whether A and B are independent events or not. 3

Resonance Eduventures Ltd.

Reg. Office & Corp. Office : CG Tower, A-46 & 52, IPIA, Near City Mall, Jhalawar Road, Kota (Raj.) - 324005

Ph. No.: +91-744-2777777, 2777700 | FAX No. : +91-022-39167222

To Know more : sms RESO at 56677 | Website : www.resonance.ac.in | E-mail : contact@resonance.ac.in | CIN : U80302RJ2007PLC024029

Toll Free : 1800 258 5555 | 7340010333 | [facebook.com/ResonanceEdu](https://www.facebook.com/ResonanceEdu) | twitter.com/ResonanceEdu | www.youtube.com/resowatch | blog.resonance.ac.in

SECTION – D

This section comprises Long Answer type(LA) question of 5 marks each.

32. A function $f: [-4, 4] \rightarrow [0, 4]$ is given by $f(x) = \sqrt{16 - x^2}$. Show that f is an onto function but not a one-one function. Further, find all possible values of 'a' for which $f(a) = \sqrt{7}$. 5

33. (a) If $A = \begin{bmatrix} -3 & -2 & -4 \\ 2 & 1 & 2 \\ 2 & 1 & 3 \end{bmatrix}$, $B = \begin{bmatrix} 1 & 2 & 0 \\ -2 & -1 & -2 \\ 0 & -1 & 1 \end{bmatrix}$, then find AB and use it to solve the following system of

equations:

$$x - 2y = 3$$

$$2x - y - z = 2$$

$$-2y + z = 3$$

OR

- (b) If $f(\alpha) = \begin{bmatrix} \cos \alpha & -\sin \alpha & 0 \\ \sin \alpha & \cos \alpha & 0 \\ 0 & 0 & 1 \end{bmatrix}$, prove that $f(\alpha) \cdot f(-\beta) = f(\alpha - \beta)$ 5

34. (a) Find the equations of the diagonals of the parallelogram PQRS whose vertices are P(4, 2, -6), Q(5, -3, 1), R(12, 4, 5) and S(11, 9, -2). Use these equations to find the point of intersection of diagonals. 5

OR

- (b) A line ℓ passes through point $(-1, 3, -2)$ and is perpendicular to both the lines $\frac{x}{1} = \frac{y}{2} = \frac{z}{3}$ and

$$\frac{x+2}{-3} = \frac{y-1}{2} = \frac{z+1}{5}. \text{ Find the vector equation of the line } \ell. \text{ Hence, obtain its distance from origin.} \quad 5$$

35. Find the area of the smaller region bounded by the curves $\frac{x^2}{25} + \frac{y^2}{16} = 1$ and $\frac{x}{5} + \frac{y}{4} = 1$, using integration. 5

Resonance Eduventures Ltd.

Reg. Office & Corp. Office : CG Tower, A-46 & 52, IPIA, Near City Mall, Jhalawar Road, Kota (Raj.) - 324005

Ph. No.: +91-744-2777777, 2777700 | FAX No. : +91-022-39167222


To Know more : sms RESO at 56677 | Website : www.resonance.ac.in | E-mail : contact@resonance.ac.in | CIN : U80302RJ2007PLC024029

Toll Free : 1800 258 5555 | 7340010333 | [facebook.com/ResonanceEdu](https://www.facebook.com/ResonanceEdu) | twitter.com/ResonanceEdu | www.youtube.com/resowatch | [blog.resonance.ac.in](https://www.blog.resonance.ac.in)

SECTION – E

This section comprises 3 source based case-based/passage based/integrated units of assessment questions of 4 marks each.

36. Recent studies suggest that roughly 12% of the world population is left handed.



Depending upon the parents, the chances of having a left handed child are as follows:

A: When both father and mother are left handed:

Chances of left handed child is 24%.

B: When father is right handed and mother is left handed:

Chances of left handed child is 22%.

C: When father is left handed and mother is right handed:

Chances of left handed child is 17%.

D: When both father and mother are right handed:

Chances of left handed child is 9%.

Assuming that $P(A) = P(B) = P(C) = P(D) = \frac{1}{4}$ and L denotes the event that child is left handed.

Based on the above information, answer the following questions:

(i) Find $P(L/C)$

1

(ii) Find $P(L/A)$

1

(iii) (a) Find $P(A/L)$

2

OR

(b) Find the probability that a randomly selected child is left handed given that exactly one of the parents is left handed.

2

Resonance Eduventures Ltd.


Reg. Office & Corp. Office : CG Tower, A-46 & 52, IPIA, Near City Mall, Jhalawar Road, Kota (Raj.) - 324005

Ph. No.: +91-744-2777777, 2777700 | FAX No.: +91-022-39167222

To Know more : sms RESO at 56677 | Website : www.resonance.ac.in | E-mail : contact@resonance.ac.in | CIN : U80302RJ2007PLC024029

Toll Free : 1800 258 5555 | 7340010333 | facebook.com/ResonanceEdu | twitter.com/ResonanceEdu | www.youtube.com/resowatch | blog.resonance.ac.in

37. Engine displacement is the measure of the cylinder volume swept by all the pistons of a piston engine. The piston moves inside the cylinder bore



The cylinder bore in the form of circular cylinder open at the top is to be made from a metal sheet of area $75\pi \text{ cm}^2$.

Based on the above information, answer the following questions:

- (i) If the radius of cylinder is $r \text{ cm}$ and height is $h \text{ cm}$, then write the volume V of cylinder in terms of

Radius r .

1

- (ii) Find $\frac{dV}{dr}$.

1

- (iii) (a) Find the radius of cylinder when its volume is maximum.

2

OR

- (b) For maximum volume, $h > r$. State true or false and justify.

2

38. The use of electric vehicles will curb air pollution in the long run.



The use of electric vehicles is increasing every year and estimated electric vehicles in use at any time t is given by the function V :

$$V(t) = \frac{1}{5}t^3 - \frac{5}{2}t^2 + 25t - 2$$

where t represents the time and $t = 1, 2, 3, \dots$ corresponds to year 2001, 2002, 2003, respectively.

Based on the above information, answer the following questions :

- (i) Can the above function be used to estimate number of vehicles in the year 2000 ? Justify.

2

- (ii) Prove that the function $V(t)$ is an increasing function.

2

Resonance Eduventures Ltd.

Reg. Office & Corp. Office : CG Tower, A-46 & 52, IPIA, Near City Mall, Jhalawar Road, Kota (Raj.) - 324005

Ph. No.: +91-744-2777777, 2777700 | FAX No. : +91-022-39167222

To Know more : sms RESO at 56677 | Website : www.resonance.ac.in | E-mail : contact@resonance.ac.in | CIN : U80302RJ2007PLC024029

Toll Free : 1800 258 5555 | 7340010333 | [facebook.com/ResonanceEdu](https://www.facebook.com/ResonanceEdu) | twitter.com/ResonanceEdu | www.youtube.com/resowatch | blog.resonance.ac.in

CUET (UG)

2023

Common University Entrance Test



About CUET (UG)

Common University Entrance Test (CUET) is the program that provides equal opportunity to all students from different Boards & different region.

- CUET, known as Common Universities Entrance Test (CUET), is a Computer Based All - India Test for admission to various Undergraduate Programmes in 44 Central Universities and other State Private + Deemed Universities of India.
- CUET (UG) is organized by National Testing Agency (NTA).
- Official Website: <www.samarth.cuet.ac.in> OR <www.cuet.nta.ac.in>

Points to Remember: CUET (UG) 2023

- Candidates can choose any Language/Domain Specific Subjects/General Test or a combination as per the requirements of the course in the specific University.
- The choice of Tests/Subjects depend on the course/s chosen by the candidate and the University/ies where admission is sought.
- A Candidate can take a maximum of **10 tests**.



S.No.	SECTION	NO. OF QUESTIONS	QUESTIONS TO ATTEMPT	DURATION
1.	SECTION-I (A+B)	50	40	45 Minutes
2.	SECTION-II	50/45	40/35	45 Minutes*
3.	SECTION-III	60	50	45 Minutes*

*Not yet announced by NTA.

- **Section IA – 13 Languages (As a medium and “Language”)**

Assamese | Bengali | English | Gujarati | Hindi | Kannada | Malayalam | Marathi | Odia | Punjabi | Tamil | Telugu | Urdu

- **Section IB – 20 Languages**

Arabic | Bodo | Chinese | Dogri | French | German | Persian | Russian | Sindhi | Tibetan | Italian | Japanese | Kashmiri | Konkani | Maithili | Manipuri | Nepali | Santhali | Spanish | Sanskrit

- **Section II – 27 Domain-Specific Subjects**

There are 27 Domains specific Subjects being offered under this Section. Candidate may choose a maximum of Six (06) Domains as desired by the applicable University/Universities.

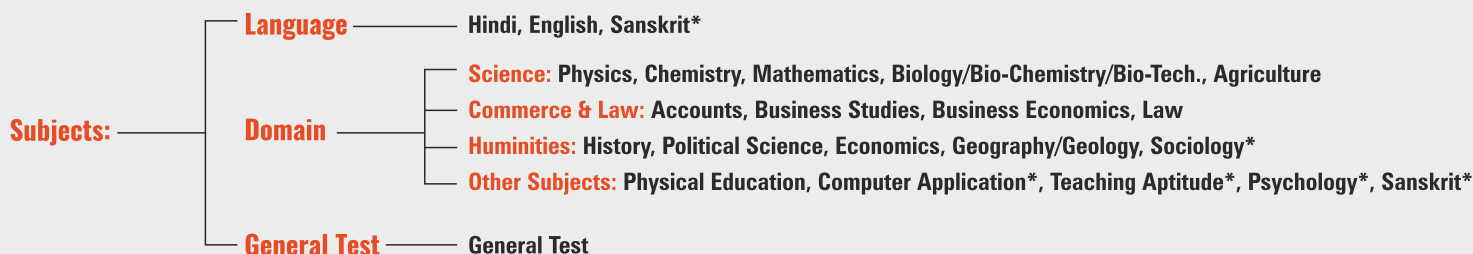
- **Section III – General Test**

General Knowledge, Current Affairs, General Mental Ability, Numerical Ability, Quantitative Reasoning (Simple application of basic mathematical concepts arithmetic/algebra geometry/mensuration/stat taught till Grade 8).

- Candidates, from any Stream (Arts / Commerce / Science), who are appearing in Class12th Examination in 2022-23 OR who have Passed the class 12th or equivalent examination, irrespective of their age can appear in the CUET (UG)–2023.
- Students of Science stream can explore some unique courses of B. Tech/ M. Tech / Bio-Tech courses through CUET exam at some renowned universities of India like DU / BHU etc.
- Candidates have to fulfil the age criteria if it is specified by a Particular University to which the candidate wishes to apply.

Resonance Offering

The following Courses are being offered by Resonance for CUET (UG)-2023



* Availability of these subjects depends on number of students enrolled.

UTSAAH

ACADEMIC WORKSHOP

Interactive Live Classes

- Available for 12+ Subjects
- 30 to 50 Days Live Workshop
- Anytime access on ResoSIR
- PDFs & Notes for Revision
- 3 Mock Test

Salient Features

- Personalised Mentorship
- Mode of Workshop: Online
- Medium: Bilingual (Hinglish)
- Based on Latest Pattern

Personal Counselling

- Counseling on the basis of Test



UMANG

MOCK TEST SERIES

10 Mock Test Papers


- Available for 20+ Subjects With Solution & Answer Key
- 450+ Minutes of Testing
- Medium: Bilingual (Only English for few Subjects)
- Mock CBT (Online)

Cumulative Analysis

- Subject-wise
- Topic-wise
- Time-wise
- Strength & Weakness

Personal Counselling

- Counseling on the basis of Test



UTKARSH


COMPLETE PACKAGE

Interactive Live Classes + 10 Mock Test Paper

- Available for 12+ Subjects
- Summary of chapter
- 10 Mock Test Papers
- 30 to 50 Days Live Workshop
- Important Question Bank

Salient Features

- Content available in PDF (Digital)
- Anytime access on ResoSIR
- Based on Latest Pattern
- Medium: English
- Mode: Online




ACADEMIC WORKSHOP (UTSAAH)	PHASE-I	22 March to 30 April 2023
	PHASE-II	15 April to 20 May 2023
TEST SERIES (UMANG)	22 March 2023 Onwards	

How to Apply
Scan QR Code



Reso Toppers


CUET (UG) 2022



794.21
800

100%ile
in 3 Subjects

St. Stephen's College
Delhi University (DU)
ANIKET ANAND
Reso Roll No.: 22603392



1175.42
1500

100%ile
in 1 Subject

Deshbandhu College
Delhi University (DU)
UPAKRAMANIKA BISHNU
Reso Roll No.: 19765817

Resonance Eduventures Limited

Registered & Corporate Office: CG Tower, A-46 & 52, IPIA, Near City Mall, Jhalawar Road, Kota (Rajasthan) - 324005
 Mob. No.: +91-77288 90101 | E-mail: cuet.ug@resonance.ac.in | Website: www.resonance.ac.in/cuet | CIN: U80302RJ2007PLC024029