

**Reso-FAST SAMPLE TEST PAPER**  
**FOR STUDENTS MOVING IN CLASS-VII IN 2019-20**  
**(PRESENTLY STUDYING IN CLASS-VI IN 2018-19)**

**Time : 1½ Hr.**

**Max. Marks : 210**

**GENERAL INSTRUCTIONS**

1. Question paper contains 70 questions of Mathematics (1 to 25), Physics (26 to 35), Chemistry (36 to 45), Biology (46 to 55) & Mental Ability (56 to 70), each question carry 3 mark.
2. Blank papers, clip boards, log tables, slide rule, calculators, mobile or any other electronic gadgets in any form is not allowed.
3. Write your Name and Roll No. in the space provided in the bottom of this booklet.
4. Before answering the paper, fill up the required details in the blank space provided in the answer sheet.
5. Do not forget to mention your roll number neatly and clearly in the blank space provided in the answer sheet.
6. There is no negative marks for wrong answer.
7. No rough sheets will be provided by the invigilators. All the rough work is to be done in the blank space provided in the question paper.
8. In case of any dispute, the answer filled in the OMR sheet available with the institute shall be final.

**MARKING CRITERIA**

No. of Questions	Type	Marks		
		Correct	Incorrect	Blank
1-70	Only one correct	Q. No. 1 to 70 (3 Mark each)	<b>NO NEGATIVE MARKS</b>	0

**IMPORTANT**

**PROCEDURE OF FILLING UP THE ANSWERS IN OMR SHEET**

**Wrong Filling**

- |   |                          |
|---|--------------------------|
| (A) <input checked="" type="checkbox"/> (C) (D) | Tick mark                |
| (A) <input checked="" type="checkbox"/> (C) (D) | Cross mark               |
| (A) <input type="checkbox"/> (C) (D)            | Half filled or semi dark |
| (A) <input type="checkbox"/> (B) (C) (D)        | Light filled             |

**Right Filling**

- |  |                             |
|--|-----------------------------|
| (A) <input type="checkbox"/> (C) (D)     | Fully darken with HB Pencil |
| (A) <input type="checkbox"/> (C) (D)     | Fully darken with HB Pencil |
| (A) <input type="checkbox"/> (C) (D)     | Fully darken with HB Pencil |
| (A) <input type="checkbox"/> (B) (C) (D) | Fully darken with HB Pencil |

Name : \_\_\_\_\_ Roll No. : \_\_\_\_\_

**PCCP Head Office**

**Address :** Plot No. A-51 [A], IPIA, Near Resonance CG Tower,  
 Behind City Mall, Jhalawar Road, Kota (Rajasthan)-324005

**Contact. No. :** 8824078330

**Website :** www.pccp.resonance.ac.in **E-mail :** pccp@resonance.ac.in



# Syllabus of class-VI\_ Reso FAST

---

## **MATHEMATICS :**

- ❖ Knowing our number
- ❖ Playing with numbers
- ❖ Fraction
- ❖ Introduction to algebra
- ❖ Whole Number
- ❖ Integers
- ❖ Decimal

## **PHYSICS :**

- ❖ Motion and measurement of distances
- ❖ Simple Machine
- ❖ Force, Work, Energy

## **CHEMISTRY :**

- ❖ Matter & Its segregation
- ❖ Classification & diversity in matter
- ❖ Materials of daily uses clothes

## **BIOLOGY :**

- ❖ Getting to know plants
- ❖ Living organisms & surroundings
- ❖ Food


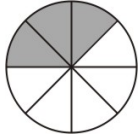
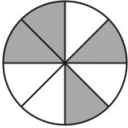
## **MENTAL ABILITY :**

- ❖ Number series
- ❖ Missing term in figures
- ❖ Coding-decoding
- ❖ Seating arrangement
- ❖ Alphabet series
- ❖ Alphabet test
- ❖ Direction sense test
- ❖ Mathematical operations

1. Roman numerals for 498 is:  
(A) CDCXVIII (B) CDCXIV  
(C) CDXCVIII (D) CDXCVII
2. According to International System, the number 648340021 would be written with commas as:  
(A) 648,340,021 (B) 6,4,8,3,0,0,2,1  
(C) 64,83,40,02,1 (D) none
3. In the product of 37 and 23, what is the place value of the digit which is prime ?  
(A) 500 (B) 700  
(C) 800 (D) 50
4. Using the digits 1, 4, 6 and 8 each only once, how many four digit odd numbers can be formed?  
(A) 4 (B) 5  
(C) 3 (D) 6
5.  $3 \times 1000 + 5 \times 10 + 2 \times 1$  Given in the expanded Form. The number is  
(A) 0352. (B) 3002.  
(C) 3052. (D) 3573.
6. The product of two odd numbers is  
(A) an even number  
(B) an odd number  
(C) Either even or odd  
(D) Multiple of 7 or 2
7. The difference between the largest 5-digit number with distinct digits and the smallest 5-digit number with distinct digits is  
(A) 88,531 (B) 89, 999.  
(C) 86,420 (D) 119,999.
8.  $38 + 83 = 83 + 38$  is an example of  
(A) commutative property.  
(B) associative property.  
(C) closure property.  
(D) distributive property.
9. The multiplicative identity element of whole numbers is  
(A) 2 (B) 1  
(C) 0 (D) -1
10. The number divisible by 11 is  
(A) 1,116,365. (B) 1,802,701.  
(C) 8,790,322. (D) 901,351.
11. The smallest number of 4- digits exactly divisible by 12,15, 20 and 35 is  
(A) 1000 (B) 1160  
(C) 1260 (D) 1360
12. The number which is neither prime nor composite is  
(A) 4 (B) 1  
(C) 2 (D) 5
13. All the factors of 25 are  
(A) 1, 5, 25 (B) 1, 5, 15  
(C) 1, 5, 20 (D) 1, 2, 4
14. The number that is equal to its additive inverse is  
(A) -1 (B) 0  
(C) +1 (D) 100
15. The correct sequence of the numbers in ascending order is \_\_\_\_\_  
(A)  $0 < -1 < -2$  (B)  $1 < -1 < 0$   
(C)  $-1 < 0 < 1$  (D)  $-2 < -3 < -4$
16. Find.  $(-7) - 8 - (-20)$   
(A) -5 (B) +25  
(C) +5 (D) -8
17. On moving 8 steps to the right of -5, Rita will get  
(A) +3 (B) +5  
(C) +8 (D) +13
18. Which of the following is correct definition of Like Fractions?  
(A) Fractions which do not have the same denominator  
(B) Fractions which have the same denominator  
(C) Fractions which have the same numerator  
(D) Fractions which do not have the same numerator

---

*(Space For Rough Work)*

19. Figure represents the fraction  $\frac{3}{9}$  is
- (A)  (B) 
- (C)  (D) all of them.
20. If  $3 - \frac{12}{5} = x$ , then the value of x will be.
- (A)  $\frac{4}{5}$  (B)  $\frac{3}{5}$   
 (C)  $\frac{2}{5}$  (D)  $\frac{1}{5}$
21. Two tens and 9 tenth can be written as  
 (A) 200.9 (B) 20.9  
 (C) 20.09 (D) 02.09
22. The value of 360 mm in metre is  
 (A) 36 m. (B) 3.06 m.  
 (C) 3.6 m. (D) 0.36 m.
23. An algebraic expression of three distinct terms is known as  
 (A) monomial. (B) binomial.  
 (C) trinomial. (D) quadrinomial.
24. Simplified form of  $3y^3 + [2y^3 - 4y^2 - \{-y^2 + (3y^2 - 4y^2) + y - 2\} - 7]$  is  
 (A)  $5y^3 - 2y^2 - y - 5$   
 (B)  $5y^3 - 2y^2 - y + 5$   
 (C)  $5y^3 - 2y^2 + y - 5$   
 (D)  $-5y^3 - 2y^2 + y - 5$
25. 3 times x added to 7 times y gives  
 (A)  $3x + 7y$  (B)  $3x - 7y$   
 (C)  $7y - 3x$  (D)  $3x/7y$
26. Foot, Stride, Fathom are the units of :  
 (A) Time (B) Length  
 (C) Mass (D) Weight
27. 1 dam is equal to :  
 (A) 10m (B) 1000 cm  
 (C) Both (A) and (B) (D) None of these
28. Length of curved line is measured by using :  
 (A) Scale  
 (B) String  
 (C) Ruler  
 (D) Can't be measured
29. Lifting a bucket of water is an example of :  
 (A) Frictional force. (B) Muscular force.  
 (C) Gravitational force. (D) Magnetic force.
30. To pick out iron pieces from garbage, the garbage pickers often use the :  
 (A) Muscular force. (B) Magnetic force.  
 (C) Frictional force. (D) Electrostatic force.
31. Choose the source of energy which is different from others :  
 (A) Gobar gas (B) Vegetable refuse  
 (C) Plants (D) Crude oil
32. A machine can  
 (A) Divide force  
 (B) Decrease speed  
 (C) Change the direction of the force applied  
 (D) All of these
33. A first order lever always has ..... in the middle.  
 (A) fulcrum  
 (B) effort force  
 (C) resistance force  
 (D) mechanical advantage
34. Which is an example of lever of first order ?  
 (A) Scissor (B) See-saw  
 (C) Pliers (D) All of these
35. Which is an example of lever of third order ?  
 (A) Scissor (B) See-saw  
 (C) Claw hammer (D) Sugar tongs

(Space For Rough Work)

36. Two examples of animal fibres are  
(A) cotton and wool. (B) cotton and flax.  
(C) silk and jute. (D) wool and silk.
37. The instrument that measures the density of liquids is  
(A) hydrometer. (B) hygrometer.  
(C) density meter. (D) ammeter
38. Pure water is  
(A) good conductor of electricity.  
(B) poor conductor of electricity.  
(C) semiconductor.  
(D) superconductor
39. The following groups of non-living objects that can be classified as man-made is  
(A) aerated drinks, ice cream and pizza.  
(B) milk, biscuits and bread.  
(C) Mango, orange and tomato.  
(D) tomato, sandwich and chocolate
40. The object which is made from coconut fibers is  
(A) sweaters. (B) brushes.  
(C) mattresses. (D) clothes.
41. The best conductor of electricity is  
(A) zinc. (B) silver.  
(C) copper. (D) gold.
42. Pebbles and stones are removed from sand by  
(A) hand picking. (B) winnowing.  
(C) threshing. (D) sieving.
43. Sugar is obtained from sugar solution by  
(A) magnetic separation. (B) decantation.  
(C) evaporation. (D) loading.
44. Filtration is used for separating  
(A) salt from sea water.  
(B) vegetables from soup.  
(C) cream from milk.  
(D) iron nails from sand
45. The part of the cotton plant that yields cotton boll is  
(A) leaf. (B) fruit.  
(C) seed. (D) stem.
46. Rat is  
(A) carnivorous. (B) herbivorous.  
(C) omnivorous. (D) insectivorous.
47. An animal that eats fruits of trees is  
(A) cat. (B) monkey.  
(C) eagle. (D) snake.
48. All of the given are milk product except  
(A) cream. (B) cheese.  
(C) chapati. (D) ghee.
49. All of the given can feed on insects except  
(A) crocodile. (B) frog.  
(C) lizard. (D) snake.
50. An edible root is  
(A) ginger. (B) potato.  
(C) carrot. (D) onion.
51. Conduction of water is the function of:  
(A) leaf. (B) stem.  
(C) root. (D) flower.
52. On a hot summer day, the leaves of a plant droop down because  
(A) the plant becomes weak.  
(B) excessive transpiration takes place.  
(C) excessive photosynthesis takes place.  
(D) no transpiration occurs.
53. When the venation appears as a net-like design on both sides of the midrib it is called:  
(A) parallel venation. (B) simple venation.  
(C) reticulate venation. (D) random venation.
54. Female reproductive part of Plant -  
(A) Stamen (B) Pistil  
(C) Flower (D) None of these
55. Transpiration occurs mainly through the  
(A) roots. (B) stem.  
(C) bud. (D) leaves
- Direction : (56) Find the missing number :**
56. 1, 3, 7, 13, ?  
(A) 19 (B) 23  
(C) 21 (D) 25

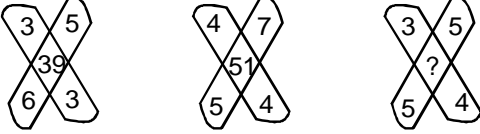
---

(Space For Rough Work)

**Direction : (57 to 58)** Find the wrong term (s) :

57. 2, 6, 11, 17, 23, 32, 41  
 (A) 6 (B) 17  
 (C) 23 (D) 32
58. CDF, DEG, EFH, FHI  
 (A) CDF (B) DEG  
 (C) FHI (D) EFH
59. If the following names are arranged alphabetically, which of them will occupy the third position ?  
 (A) Surendra (B) Sindhu  
 (C) Shurendra (D) Sadhana
60. If **BOX** is coded as **CDPQYZ**, what will be the last two letters of word in the same code for **HERO** ?  
 (A) N, M (B) M, N  
 (C) P, Q (D) Q, P

**Direction (61 to 62)** Find the missing terms in the figure.

61.   
 (A) 47 (B) 45  
 (C) 37 (D) 35

62. 

7	9	11
2	3	2
51	84	?

  
 (A) 125 (B) 100  
 (C) 123 (D) 64

**Directions : (63)** Arrange the following group such that when arranged in a specific order, meaningful word is formed.

63. **T R I F U**  
**1 2 3 4 5**  
 (A) 3,1, 2, 4, 5 (B) 4, 2, 5, 3, 1  
 (C) 4, 3, 2, 1, 5 (D) 5, 3, 2, 1, 4

64. If **air** is called **water**, **water** is called **green**, **green** is called **dust**, **dust** is called **yellow** and **yellow** is called **cloud**, which of the following does fish live in ?  
 (A) Air (B) Water  
 (C) Green (D) Dust
65. If **KLM** is written **18** then how would **SQR** be written in that code ?  
 (A) 30 (B) 54  
 (C) 26 (D) 27
66. Reena walks Eastwards after a while she turns to her left and then turn to her right. Finally she turn to her left. In which direction is she moving now ?  
 (A) West (B) East  
 (C) South (D) North
67. Rahul travels 8 km East, then 6 km north, How far is Amar from the starting point ?  
 (A) 16 kms. (B) 10 kms.  
 (C) 6 kms. (D) 5 kms.

**Directions : (68 to 69)** Read the following information carefully and answer the questions given below it :

- (A) There are five friends.  
 (B) They are standing in a row facing South.  
 (C) J is to the immediate right of A.  
 (D) P is between B and S.  
 (E) S is between J and P.
68. Who is at the extreme left end ?  
 (A) A (B) B  
 (C) S (D) Data inadequate
69. Who is in the middle ?  
 (A) B (B) J  
 (C) P (D) S
70. What is the value of  $10 \times 10 \div 10 = ?$   
 (A) 10 (B) 1000  
 (C) 10000 (D) None of these

## ANSWER KEY

Ques.	1	2	3	4	5	6	7	8	9	10	11	12	13	14	15
Ans.	C	A	D	D	C	B	A	A	B	D	C	B	A	B	C
Ques.	16	17	18	19	20	21	22	23	24	25	26	27	28	29	30
Ans.	C	A	B	A	B	B	D	C	A	A	B	C	B	B	B
Ques.	31	32	33	34	35	36	37	38	39	40	41	42	43	44	45
Ans.	D	C	A	D	D	D	A	B	A	C	B	D	C	B	B
Ques.	46	47	48	49	50	51	52	53	54	55	56	57	58	59	60
Ans.	C	B	C	A	C	B	B	C	B	D	C	C	C	B	C
Ques.	61	62	63	64	65	66	67	68	69	70					
Ans.	C	C	B	C	D	D	B	A	D	A					

## NURTURING TALENT ... CREATING CHAMPIONS ...



### IESO Final Stage RESULT: 2017-18



**VAIBHAV KHATER**  
Reso Roll No.: 17413238  
Classroom student since class-VIII  
Study Center: Udaipur | Hometown: Udaipur

**1 SILVER & 2 BRONZE  
WON BY TEAM INDIA**

At 12<sup>th</sup> INTERNATIONAL EARTH SCIENCE OLYMPIAD  
(IESO) held at Kanchanaburi, Thailand.



**ABHINAV SRINIVAS**  
Reso Roll No.: 18405135  
Classroom student since class-VIII  
Study Center: Raipur | Hometown: Raipur

### IJSO (Stage)-1 NSEJS RESULT - 2018



**AIR-1**

Maharashtra State Topper  
Siddhant Mukherjee  
Roll No. 17437554  
Hometown: Mumbai

**5 STATE TOPPERS**

(Maharashtra, Gujarat,  
Rajasthan, Odisha & Bihar)

**Total Selections: 48** (Classroom: 42 | DLPD: 06) | **11 Ranks in Top-50** (1, 3, 6, 12, 13, 18, 21, 23, 29, 44, 44)

### IJSO (Stage)-2 INJSO RESULT-2018

**9 Students**  
selected Out of  
Total 35 for OCSC

**25.71%**  
Selection share

### NTSE (Stage-2) RESULT: 2017

**171**

**Total Selections**

51.53 % Growth in Result from last year

### RESONANCE EDUVENTURES LTD.

**PCCP HEAD OFFICE:** CG Tower-2, Plot No. A-51 (A), IPIA, Behind City Mall, Jhalawar Road, Kota (Raj.) - 324005

**Tel. No.:** 0744-6635569 | **Website:** www.pccp.resonance.ac.in





**Resonance<sup>®</sup>**  
Educating for better tomorrow



# VARDAAN

Score more. Pay less. Study more.

Pay the fees for 1 year & study for 5 years



For Classes VIII, IX & X

Test Dates: 14 Oct & 25 Nov 2018

YOUR MAXIMUM EFFORTS WILL REAP YOU BENEFITS FIVEFOLD.

**WINTER WORKSHOP**  
For Class V to X

Targets

OLYMPIADS | NTSE | IJSO | BOARD

**SCHEDULE**

Stage-1: 24 Dec to 30 Dec 2018

31 Dec to 06 Jan 2019

Stage-2 & Board: 24 Dec to 06 Jan 2019

📞 0744-6635569 🌐 [www.pccp.resonance.ac.in](http://www.pccp.resonance.ac.in)