

# • SAMPLE TEST PAPER •

Resonance National Entrance Test (ResoNET)

For Pre-foundation Career Care Programmes (PCCP)

**FOR CLASS IX/ WISDOM/ SHARP**



**Practice, Persistence and Performance**





CG Tower Campus, Kota



## VISION

Excellence in Career Education



## MISSION

Practice, Persistence and Performance



## VALUES

- Leadership with humane touch at various levels
- Integrity, transparency and openness in all our actions
- Innovation and pursuit of excellence in career education
- Address the needs of students through career oriented initiatives
- Strive to continuously improve our processes and quality of deliverables

**R.K. Verma (RKV Sir)**  
 B.Tech. (IIT-Madras, 1994)  
 Founder | Managing Director  
 Head (Academics) | Sr. Faculty (Physics)

**About Resonance:**  
 Place : Kota (Rajasthan)  
 Established on: 11<sup>th</sup> April, 2001

S.No.	Academic Division	Classes	Target Examinations
1.	Pre-Engineering Division: JEE (Advanced)	IX, X, XI, XII & XII+	JEE (Advanced)   JEE (Main)   Olympiads
2.	Pre-Engineering Division: JEE (Main)	IX, X, XI, XII & XII+	JEE (Main)   Other Engineering Entrance Exams
3.	Pre-Medical Division	IX, X, XI, XII & XII+	NEET (UG)   Olympiads
4.	Pre-foundation Career Care Programme Division (PCCP)	V, VI, VII, VIII, IX & X	School & Board Exams   NTSE   Olympiads   STSE
5.	Commerce & Law Programme Division (CLPD)	XI, XII & XII+	CA   CS   CLAT   Board   CUET (UG)   UG & PG
6.	Pre-university & School Preparatory Division (PSPD)	XI, XII & XII+	Board Exams   CUET-UG   IPMAT   JIPMAT   BITSAT   STSE   UCEED   College Entrance Exam UG & Scholarship Exams
7.	Resonance Multiple Examination Division (ResoMEx)	XII+   UG & PG	SSC   BANKS   RAILWAYS   NDA   Other Govt. & Private Recruitment Exams
8.	Distance Learning Programme Division (DLPD)	V to XII & XII+	JEE (Main)   JEE (Advanced)   NEET (UG)   OLYMPIADS   PRE-FOUNDATION   OTHERS
9.	EdTech Division	V to XII & XII+	JEE (Main)   JEE (Advanced)   NEET (UG)   PRE-FOUNDATION
10.	Resonance International Studies Division (Reso-ISD)	VI to XII & XII+	JEE (Main)   JEE (Advanced)   NEET (UG)   OLYMPIADS   PRE-FOUNDATION Upcoming: SAT   IELTS   GRE   PTE

**CLASS**  
**IX**

## **SAMPLE TEST PAPER (STP)**

(For Class-VIII Passed Students)

**CLASS-IX (FOR CLASS VIII TO IX/WISDOM/SHARP MOVING STUDENT)**

**TARGET: SCHOOL / OLYMPIAD/NTSE/IJSO**

S.No.	Particulars	Page Number		Total Pages
		From	To	
1	Guidelines and Instructions for Entrance Test	2	2	1
2	ResoNET Question Paper Structure & Syllabus	3	3	1
3	<b>Sample Test Paper (STP):</b> For Class VIII passed students (For the students applying for course Class VIII to IX moving Student).	4	10	7
4	Sample Test Paper: Answer Key (AK)	11	11	1
5	Sample ORS Answer Sheet for Resonance National Entrance Test (ResoNET)	12	12	1
	<b>Total Pages</b>			<b>11</b>

The sample test papers are only for reference and guidance. The sample papers given in the booklet are actually the papers of previous year's ResoNET conducted by Resonance for its various courses.

**Note :** Resonance reserves the right to change the pattern of Resonance National Entrance Test (ResoNET). Previous year papers do not guarantee that the papers for this year selection test will be on the same pattern. However, the syllabus of the test paper will be equivalent to the syllabus of qualifying school/board examination and as given on page nos. 1 to 12.

© Copyright reserved.

All rights reserved. Any photocopying, publishing or reproduction of full or any part of this study material is strictly prohibited. This material belongs to enrolled student of RESONANCE only. Any sale/resale of this material is punishable under law, subject to Kota Jurisdiction only.

## GUIDELINES AND INSTRUCTIONS FOR ENTRANCE TEST

### FOR ONLINE EXAMINATION

In Online Examination system; Test will be conducted in fully computerized, user friendly mode with advanced security features making it fair, transparent and standardized.

#### Information & Instructions:

1. The examination does not require using any paper, pen, pencil and calculator.
2. Every student will take the examination on a Laptop/Desktop/Smart Phone.
3. If you are using your personal laptop/Desktop, please make sure that you **have installed the necessary software and programs** & having proper internet connection before the examination day. It is important that your laptop/desktop/Smartphone-Mobile **fulfils the system requirements** of the programme.
4. You must bring your own power supply for use during the examination.
5. If failure to comply with these recommendations results in technical problems that cause a delay in your examination, you cannot expect to be granted extended time.
6. Kindly remember your Resonance Application Form No. as a Roll No.
7. You are not permitted to leave the Venue/any movement from Laptop/Desktop/Mobile screen during examination.
8. The students just need to click on the Right Choice / Correct option from the multiple choices /options given with each question. For Multiple Choice Questions, each question has four options, and the candidate has to click the appropriate option.

### FOR OFFLINE EXAMINATION

1. This booklet is your Question Paper.
2. The **Question Paper Code** is printed on the top right corner of this sheet.
3. Blank papers, clip boards, log tables, slide rule, calculators, mobile or any other electronic gadgets in any form are not allowed to be used.
4. Write your **Name & Application Form Number** in the space provided in the bottom of this booklet.
5. Before answering the paper, fill up the required details in the blank space provided in the Objective Response Sheet.
6. Do not forget to mention your paper code and **Application Form Number** neatly and clearly in the blank space provided in the Objective Response Sheet (ORS) / Answer Sheet.
7. No rough sheets will be provided by the invigilators. All the rough work is to be done in the blank space provided in the question paper.
8. No query related to question paper of any type is to be put to the invigilator.

## RESONET QUESTION PAPER STRUCTURE

### For Class VIII to IX Moving Student

S.No.	Part	Subject	Type of Question	No. of Ques.	Marking Scheme		
					Full Marks per Qs.	Negative Marking	Total
1 to 25	I	Mathematics	Single Choice Questions (Only One Correct Option) (MCQ)	25	3	0	75
26 to 35	II	Physics	Single Choice Questions (Only One Correct Option) (MCQ)	10	3	0	30
36 to 45	III	Chemistry	Single Choice Questions (Only One Correct Option) (MCQ)	10	3	0	30
46 to 55	IV	Biology	Single Choice Questions (Only One Correct Option) (MCQ)	10	3	0	30
56 to 70	V	Mental Ability	Single Choice Questions (Only One Correct Option) (MCQ)	15	3	0	45
<b>Total</b>				<b>70</b>			<b>210</b>

## RESONET SYLLABUS

### FOR CLASS VIII TO IX MOVING STUDENT

SUBJECT	SYLLABUS FROM CLASS	TOPIC
MATHEMATICS	VIII	Squares & Square Roots, Cubes & Cube Roots, Linear equation in one variable, Quadrilaterals, Playing with numbers, Algebraic expressions, Algebraic identities, Exponents and powers, Percentage and its applications, Compound interest, Direct & inverse variations, Visualising solid shapes, Mensuration, Introduction to graph, Statistics, Probability.
PHYSICS	VIII	Force, Pressure, Friction, Sound wave, Electricity, Light, Earthquakes, Rain, Thunder and Lightning, Night Sky.
CHEMISTRY	VIII	Synthetic fibres and plastics, Metals and non-metals, Coal & Petroleum, Combustion and Flame.
BIOLOGY	VIII	Crop production & management, Micro-Organism friend & foe, Conservation of plants & animals, Cellular level of organization, Reproduction in Animal, Pollution of Air & Water, Reaching the Age of Adolescence.
MENTAL ABILITY	VIII	Number Series, Alphabet Series, Letter Repeating Series, Missing term in figure, Mathematical Operations, Coding-Decoding, Direction Sense, Ranking & Ordering-Test, Blood Relation, Sitting Arrangement, Puzzle Test, Venn Diagram, Dice Test, Analogy & Classification, Non Verbal Series, Non Verbal Analogy, Classification.

**CLASS**
**IX**
**SAMPLE TEST PAPER (STP)**

(For Class-IX Passed Students)

**CLASS-IX (FOR CLASS VIII TO IX/WISDOM/SHARP MOVING STUDENT)**
**TARGET: SCHOOL / OLYMPIAD/NTSE/IJSO**
**For Class IX to X Moving Student**

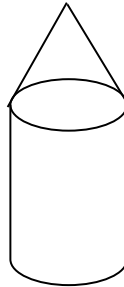
S.No.	Part	Subject	Type of Question	No. of Ques.	Marking Scheme		
					Full Marks per Qs.	Negative Marking	Total
1 to 25	I	Mathematics	Single Choice Questions (Only One Correct Option) (MCQ)	25	3	0	75
26 to 35	II	Physics	Single Choice Questions (Only One Correct Option) (MCQ)	10	3	0	30
36 to 45	III	Chemistry	Single Choice Questions (Only One Correct Option) (MCQ)	10	3	0	30
46 to 55	IV	Biology	Single Choice Questions (Only One Correct Option) (MCQ)	10	3	0	30
56 to 70	V	Mental Ability	Single Choice Questions (Only One Correct Option) (MCQ)	15	3	0	45
<b>Total</b>				<b>70</b>			<b>210</b>

**PART-I : MATHEMATICS**

This section contains 25 questions. Each question has 4 choices (A), (B), (C) and (D) for its answer, out of which **ONLY ONE** is correct.

- Ten more than the smallest 3-digit number is  
 (A) 109                      (B) 110                      (C) 90                      (D) 120
- If a number is multiplied by itself three times, then it is called a/an  
 (A) square number.      (B) cube number.      (C) prime number.      (D) even number
- Solve:  $5x - 7 = 2x + 8$   
 (A) 1                      (B) 3                      (C) 5                      (D) 7
- In a parallelogram PQRS, if  $R = 105^\circ$ , measures of P and Q are  
 (A)  $75^\circ$  and  $105^\circ$ .      (B)  $90^\circ$  and  $90^\circ$ .      (C)  $105^\circ$  and  $75^\circ$ .      (D)  $120^\circ$  and  $60^\circ$ .
- The usual form of  $1000 \times 3 + 100 \times 6 + 10 \times 0 + 1 \times 9$  is  
 (A) 3691.                      (B) 3619.                      (C) 3609.                      (D) 3069
- Add  $ab - bc$ ,  $bc - ca$ ,  $ca - ab$   
 (A)  $pq - rp$ .                      (B)  $qr - pq$ .                      (C) 0.                      (D) 1.
- The Subtraction of  $3ab$  ( $a - b$ ) from  $2ab$  ( $a + b$ ) gives  
 (A)  $5ab^2 - a^2b$ .                      (B)  $a^2b + 5ab^2$ .                      (C)  $a^2b^2 - ab$ .                      (D)  $ab^2 + 5$ .

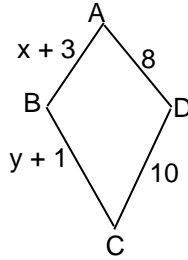
8. Which of the following statement is correct?  
 (A)  $a^0 = 0$                       (B)  $a^3 + a^2 = a^5$                       (C)  $(a^7)^3 = a^{21}$                       (D)  $a^1 = 1$
9. Count of 90 parent's surveyed only 20% parents helped their wards in their home work; the number of parents who helped their wards is  
 (A) 18.                      (B) 20.                      (C) 22.                      (D) 30.
10. The compound interest compounded half yearly on Rs 1520 for 1.5 years at the rate of 8% per annum is (in Rs.)  
 (A) 189.80.                      (B) 180.                      (C) 170.                      (D) 60.
11. If 36 men can do a piece of work in 25 days, then the number of days taken by 15 men will be  
 (A) 50.                      (B) 56.                      (C) 60.                      (D) 72.
12. In this figure a cone is surmounted on a



- (A) cylinder.                      (B) cone.                      (C) hemisphere.                      (D) rectangle.
13. The area of four walls of a room whose length is 12 m, width is 8 m and height is 10 m is  
 (A) 100 m<sup>2</sup>.                      (B) 200 m<sup>2</sup>.                      (C) 400 m<sup>2</sup>.                      (D) 600 m<sup>2</sup>
14. From the origin, move 2 units to the left on x-axis and then move 4 units up. The coordinates of the point are  
 (A) (2, 4).                      (B) (-2, 4).                      (C) (4, 2).                      (D) (-4, 2).
15. A die is rolled 100 times with the following results.
- | Outcome | Frequency |
|---------|-----------|
| 1       | 22        |
| 2       | 15        |
| 3       | 9         |
| 4       | 16        |
| 5       | 18        |
| 6       | 20        |
- The probability of getting 2 is  
 (A) 2/15.                      (B) 1/50.                      (C) 2/20.                      (D) 3/20.
16. Data available in an unorganized form is called  
 (A) a raw data.                      (B) a tally.                      (C) a frequency.                      (D) an array
17. If  $\sqrt{1 + \frac{27}{169}} = 1 + \frac{x}{13}$ , then x =  
 (A) 1                      (B) 14  
 (C) Cannot be determined                      (D) None
18. Cube root of 658503 is  
 (A) 97.                      (B) 87.                      (C) 83.                      (D) 77.

19. The perimeter of a rectangular park is 186 metres. If the length of the park is twice its breadth, then its length and breadth will be  
 (A) 31 metres and 62 metres. (B) 62 metres and 31 metres.  
 (C) 62 metres and 124 metres. (D) 124 metres and 62 metres

20. The value of the variable  $x$  and  $y$  in the given kite are respectively



- (A) 5 and 9. (B) 9 and 5. (C) 5 and 7. (D) 7 and 5.
21. In a two-digit number, the digit in the unit place is four times the digit in the tens place and the sum of the digits is equal to 10, then the number is  
 (A) 26. (B) 28. (C) 40. (D) 82.
22. Expressions that contain only one term is called  
 (A) an identity. (B) a monomial. (C) a like term. (D) an unlike term
23. Using the identity  $(x + a)(x + b) = x^2 + a(x + b) + ab$ , the product  $103 \times 98$  is  
 (A) 10004. (B) 10006. (C) 10094. (D) 10100.
24. The value of  $[1^2 + 2^2 + 3^2] \times 6^2$  is  
 (A) 49 (B) 50 (C) 45 (D) 51
25. A machinery worth Rs 10,000 depreciated by 5%. Its value after one year is  
 (A) Rs 9000. (B) Rs 9500. (C) Rs 10,000. (D) Rs 10,500

### PART-II :PHYSICS

This section contains 10 questions. Each question has 4 choices (A), (B), (C) and (D) for its answer, out of which **ONLY ONE** is correct.

26. The strength of force is expressed by?  
 (A) Magnitude (B) Mass (C) Weight (D) Longitudinal force
27. Pascal measures the  
 (A) pressure on a body (B) area of a body  
 (C) force on a body (D) volume of a body
28. If the force is applied along the downward direction, the friction acts  
 (A) downwards (B) upwards (C) right hand side (D) sideways
29. The vibrating part of the flute is the  
 (A) water column. (B) stretched string.  
 (C) stretched membrane. (D) air column.



30. A body has 20 electrons and 30 protons. What charge will the body possess?  
 (A) Positive Charge. (B) Negative Charge. (C) Neutral. (D) None.
31. A real image :  
 (A) Cannot be captured on a screen.  
 (B) Can be captured on a screen.  
 (C) Can be captured only on a celluloid screen.  
 (D) None of the above.
32. Which of the following scales are not linear in nature?  
 (i) Decibel. (ii) Richter. (iii) Meter.  
 (A) (i) only. (B) (iii) only. (C) (ii) only. (D) (i) and (ii).
33. The path of conductive air which extends from the thunder cloud:  
 (A) Electric discharge (B) Step leader (C) Thunderstrom (D) None
34. Time taken by Neptune to complete one revolution around the sun :  
 (A) 100 years. (B) 120 years. (C) 165 years. (D) 200 years.
35. Which of the following is a semi conductor:  
 (A) Vacuum. (B) Germanium. (C) Mica. (D) Copper.

**PART-III : CHEMISTRY**

This section contains 10 questions. Each question has 4 choices (A), (B), (C) and (D) for its answer, out of which **ONLY ONE** is correct.

36. Polyester is made of repeating units of chemical called as  
 (A) ether. (B) ester. (C) acid. (D) alcohol.
37. Out of them which is most reactive metal :  
 (A) iron. (B) zinc. (C) copper. (D) silver.
38. The one that is stored in water is  
 (A) iron. (B) zinc. (C) copper. (D) phosphorus.
39. Sodium is kept in:  
 (A) Acid (B) Base (C) Water (D) Kerosene
40. The white marble of Taj Mahal is changed to yellow because of  
 (A) global warming. (B) deforestation. (C) fog. (D) acid rain.
41. Unburnt carbon particles in a fuel may cause  
 (A) typhoid. (B) cholera. (C) asthma. (D) malaria.
42. The main constituent of coal is  
 (A) nickel. (B) carbon. (C) oxygen. (D) iron.
43. Ointments are prepared from  
 (A) lubricating oil. (B) coke. (C) bitumen. (D) paraffin wax.
44. A species having a negative charge on it, is known as  
 (A) stable atom. (B) cation. (C) anion. (D) valency.
45. The fuel earlier used in railway engines to produce steam was  
 (A) coal. (B) coke. (C) coal gas. (D) coal tar.

**PART-IV: BIOLOGY**

This section contains 10 questions. Each question has 4 choices (A), (B), (C) and (D) for its answer, out of which **ONLY ONE** is correct.

46. Growing two or more crops in definite row pattern is known as –  
 (A) Crop rotation      (B) Intercropping      (C) Mixed cropping      (D) Organic Cropping
47. Which micro-organism is the cause of malaria –  
 (A) Plasmodium      (B) Amoeba      (C) Salmonella typhi      (D) None of these
48. Flora consists –  
 (A) Plant species      (B) Animal species      (C) Microorganism      (D) None of the above
49. Single membrane is present in –  
 (A) Mitochondria      (B) Chloroplast      (C) Nucleus      (D) Lysosome
50. In most mammals , testes are located in scrotal sacs for –  
 (A) Sex differentiation      (B) Sperm development in cooler condition  
 (C) Independent functioning of kidney      (D) More space to visceral organs
51. Pick out the pollutant  
 (A) Carbon monoxide      (B) Oxygen      (C) Nitrogen      (D) Hydrogen
52. The stage of sexual maturity is called as –  
 (A) Menarche      (B) Puberty      (C) Menopause      (D) Gestation
53. In asexual reproduction involves –  
 (A) Two parents      (B) Four parents      (C) One parent      (D) No parents
54. Biotic component of biosphere is not constituted by –  
 (A) Producers      (B) Consumers      (C) Decomposer      (D) Air
55. Structures present in a cell which is responsible for determination of the sex of a baby is –  
 (A) Cytoplasm      (B) Cell membrane      (C) Nucleus      (D) Chromosome

**PART-V : MENTAL ABILITY**

This section contains 15 questions. Each question has 4 choices (A), (B), (C) and (D) for its answer, out of which **ONLY ONE** is correct.

**Direction : (56 to 57) Find the missing term.**

56. 11, 15, 21, 29, ?  
 (A) 40      (B) 41      (C) 37      (D) 39
57. ATL, BUM, CVN, DWO, ?  
 (A) EZP      (B) EYQ      (C) EFP      (D) EXP

**Directions : (58)** Which sequence of letters when placed at the blanks one after the other will complete the given letter series?

58. J \_ H L \_ K \_ I H \_ L K J I \_ L L K  
 (A) H I L J L      (B) I L J L H      (C) L J L H I      (D) J L H I L

**Direction : (59) Find the missing term.**

59.

N	O	P
S	R	?
T	U	V

- (A) T                                      (B) K                                      (C) F                                      (D) Q

60. If '+' means 'multiplied by', '-' means 'divided by', 'x' means 'plus' and '÷' means 'minus' then  $(18 + 10 \times 20) - 8 \div 6 = ?$   
 (A) 92                                      (B) 35                                      (C) 19                                      (D) 26

61. If A means E, B means F, C means G and H means L, then how will you code 'GO AHEAD'?  
 (A) KS FLIFH                              (B) HP BIFBE                              (C) KS GLIGH                              (D) KS ELIEH

62. A tourist drives 10 km towards east and turns to the right hand and drives 3 km. Then he drives towards west (turning to his right) 3 km. He then turns to his left and drives 2 km. Finally he turns to his right and travels 7 km. How far is he from his starting point and in which direction would he be?  
 (A) 10 km, East                              (B) 5 km, South                              (C) 8 km, West                              (D) 5 km, West

**Directions : (63)** These questions are based on the following arrangement of symbols, letters and numbers.  
 $\uparrow 9 B Q = \$ 2 5 R J \partial L 3 @ Y M E 6 8 \spadesuit \div D F 4 \beta H 7 \odot$

63. How many such numbers are there in the arrangement each of which is immediately preceded by a symbol but not immediately followed by a letter?  
 (A) Nil                                      (B) One                                      (C) Two                                      (D) Three

64. Pointing to a man in a photograph, a woman says. "He is the only son of the only daughter-in-law of my only son's father." How is the man related to the woman?  
 (A) Son                                      (B) Father                                      (C) Son-in-law                                      (D) Grandson


65. Five girls are sitting in a row facing south. Priya is not adjacent to Shalini or Niti. Priti is not adjacent to Shalini and is at extreme right end. Priya is adjacent to Mahi. Mahi is at the middle in the row. Then, Priti is adjacent to whom out of the following?  
 (A) Priya                                      (B) Shalini                                      (C) Niti                                      (D) Mahi

**Direction : (66) Read the information given below and answer the questions that follow :**

- (i) In a family of six persons A, B, C, D, E and F, there are two married couples.
- (ii) D is grandmother of A and mother of B.
- (iii) C is wife of B and mother of F.
- (iv) F is the grand daughter of E.

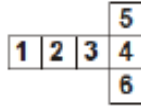
66. Who among the following is one of the couples?  
 (A) CD                                      (B) DE  
 (C) EB                                      (D) Cannot be determined

67. Terrorists who are not hard-core criminals are represented by.



- (A) 2                                      (B) 3                                      (C) 4                                      (D) 1

68. If you cut out and fold the pattern shown below to make a cube, which letter will be on the face of the cube opposite the face labeled 3?



- (A) 2                      (B) 1                      (C) 5                      (D) 4

**Directions : (69)** In each of the following questions three out of four alternatives contain alphabet / word / number /pairs of the same property. Find the one that does not belong to the group.

69. (A) 2442                      (B) 3773                      (C) 4545                      (D) 6776

**Directions : (70)** Out of the four figures (A), (B), (C) and (D), given in each problem, three are similar in a certain way. However, one figure is not like the other three. Choose the figure which is different from the rest.



Space for Rough Work / (कच्चे कार्य के लिए स्थान)

**ANSWER KEY (AK)**

<b>PART-I: MATHEMATICS</b>	Q.No.	1	2	3	4	5	6	7	8	9	10
	Ans.	B	B	C	C	C	C	A	C	A	A
	Q.No.	11	12	13	14	15	16	17	18	19	20
	Ans.	C	A	C	B	D	A	A	B	B	A
	Q.No.	21	22	23	24	25					
	Ans.	B	B	C	A	B					
<b>PART-II: PHYSICS</b>	Q.No.	26	27	28	29	30	31	32	33	34	35
	Ans.	A	A	B	D	A	B	D	B	C	B
<b>PART-III: CHEMISTRY</b>	Q.No.	36	37	38	39	40	41	42	43	44	45
	Ans.	B	B	D	D	D	C	B	D	C	A
<b>PART-IV: BIOLOGY</b>	Q.No.	46	47	48	49	50	51	52	53	54	55
	Ans.	B	A	A	D	B	A	B	C	D	D
<b>PART-IV: MENTAL ABILITY</b>	Q.No.	56	57	58	59	60	61	62	63	64	65
	Ans.	D	D	B	D	C	D	B	B	D	A
	Q.No.	66	67	68	69	70					
	Ans.	B	D	B	C	D					

# SAMPLE TEST PAPER (STP)



PCCP ResoNET-2024

Objective Response Sheet (ORS)

2024-2025

<b>COURSE NAME</b>	Application Form No. <input type="text"/>
PCCP Course <input type="radio"/>	Student's Name <input type="text"/>
WINNER <input type="radio"/>	(Capital Letters Only)
WISDOM <input type="radio"/>	Test City / Venue _____ CLASS _____
	Room No. _____ Test Date <input type="text"/>

Darken the bubble completely Right     Wrong

Note :Students are advised-do not disturb the five guide view marks (Dark Circles -- printed on corners of ORS). Other wise ORS will not be processed for result.

Application Form No.

MEDIUM

English  Hindi

CATEGORY

General

OBC

SC

ST

DS

PH

- 1  A  B  C  D
- 2  A  B  C  D
- 3  A  B  C  D
- 4  A  B  C  D
- 5  A  B  C  D
- 6  A  B  C  D
- 7  A  B  C  D
- 8  A  B  C  D
- 9  A  B  C  D
- 10  A  B  C  D
- 11  A  B  C  D
- 12  A  B  C  D
- 13  A  B  C  D
- 14  A  B  C  D
- 15  A  B  C  D
- 16  A  B  C  D
- 17  A  B  C  D
- 18  A  B  C  D
- 19  A  B  C  D
- 20  A  B  C  D
- 21  A  B  C  D
- 22  A  B  C  D
- 23  A  B  C  D
- 24  A  B  C  D
- 25  A  B  C  D
- 26  A  B  C  D
- 27  A  B  C  D
- 28  A  B  C  D
- 29  A  B  C  D
- 30  A  B  C  D
- 31  A  B  C  D
- 32  A  B  C  D
- 33  A  B  C  D
- 34  A  B  C  D
- 35  A  B  C  D
- 36  A  B  C  D
- 37  A  B  C  D
- 38  A  B  C  D
- 39  A  B  C  D
- 40  A  B  C  D
- 41  A  B  C  D
- 42  A  B  C  D
- 43  A  B  C  D
- 44  A  B  C  D
- 45  A  B  C  D

- 46  A  B  C  D
- 47  A  B  C  D
- 48  A  B  C  D
- 49  A  B  C  D
- 50  A  B  C  D
- 51  A  B  C  D
- 52  A  B  C  D
- 53  A  B  C  D
- 54  A  B  C  D
- 55  A  B  C  D
- 56  A  B  C  D
- 57  A  B  C  D
- 58  A  B  C  D
- 59  A  B  C  D
- 60  A  B  C  D
- 61  A  B  C  D
- 62  A  B  C  D
- 63  A  B  C  D
- 64  A  B  C  D
- 65  A  B  C  D
- 66  A  B  C  D
- 67  A  B  C  D
- 68  A  B  C  D
- 69  A  B  C  D
- 70  A  B  C  D
- 71  A  B  C  D
- 72  A  B  C  D
- 73  A  B  C  D
- 74  A  B  C  D
- 75  A  B  C  D
- 76  A  B  C  D
- 77  A  B  C  D
- 78  A  B  C  D
- 79  A  B  C  D
- 80  A  B  C  D
- 81  A  B  C  D
- 82  A  B  C  D
- 83  A  B  C  D
- 84  A  B  C  D
- 85  A  B  C  D
- 86  A  B  C  D
- 87  A  B  C  D
- 88  A  B  C  D
- 89  A  B  C  D
- 90  A  B  C  D

CLASS

Please turn overleaf & fillup the required information



Reg. & Corp. Office : CG Tower, A-46 & 52, IPIA, Near City Mall, Jhalawar Road, Kota (Raj.)-324005

Website : [www.resonance.ac.in](http://www.resonance.ac.in) | E-mail : [contact@resonance.ac.in](mailto:contact@resonance.ac.in)

Toll Free : 1800 258 5555 | CIN: U80302RJ2007PLC024029

STPPH225\_CLASS-IX # 12